

*Crux Mathematicorum* is a problem-solving journal at the secondary and university undergraduate levels, published online by the Canadian Mathematical Society. Its aim is primarily educational; it is not a research journal. Online submission:

<https://publications.cms.math.ca/cruxbox/>

*Crux Mathematicorum* est une publication de résolution de problèmes de niveau secondaire et de premier cycle universitaire publiée par la Société mathématique du Canada. Principalement de nature éducative, le Crux n'est pas une revue scientifique. Soumission en ligne:

<https://publications.cms.math.ca/cruxbox/>

The Canadian Mathematical Society grants permission to individual readers of this publication to copy articles for their own personal use.

© CANADIAN MATHEMATICAL SOCIETY 2020. ALL RIGHTS RESERVED.

ISSN 1496-4309 (Online)


La Société mathématique du Canada permet aux lecteurs de reproduire des articles de la présente publication à des fins personnelles uniquement.

© SOCIÉTÉ MATHÉMATIQUE DU CANADA 2020 TOUS DROITS RÉSERVÉS.

ISSN 1496-4309 (électronique)

Supported by / Soutenu par :

- Intact Financial Corporation
- University of the Fraser Valley



### *Editorial Board*

<i>Editor-in-Chief</i>	<b>Kseniya Garaschuk</b>	University of the Fraser Valley
<i>MathemAttic Editors</i>	<b>John McLoughlin</b> <b>Shawn Godin</b> <b>Kelly Paton</b>	University of New Brunswick Cairine Wilson Secondary School Quest University Canada
<i>Olympiad Corner Editors</i>	<b>Alessandro Ventullo</b> <b>Anamaria Savu</b>	University of Milan University of Alberta
<i>Articles Editor</i>	<b>Robert Dawson</b>	Saint Mary's University
<i>Associate Editors</i>	<b>Edward Barbeau</b> <b>Chris Fisher</b> <b>Edward Wang</b> <b>Dennis D. A. Epple</b> <b>Magdalena Georgescu</b> <b>Chip Curtis</b>	University of Toronto University of Regina Wilfrid Laurier University Berlin, Germany BGU, Be'er Sheva, Israel Missouri Southern State University
<i>Guest Editors</i>	<b>Vasile Radu</b> <b>Aaron Slobodin</b> <b>Andrew McEachern</b>	Birchmount Park Collegiate Institute University of Victoria York University
<i>Editor-at-Large</i> <i>Managing Editor</i>	<b>Bill Sands</b> <b>Denise Charron</b>	University of Calgary Canadian Mathematical Society

IN THIS ISSUE / DANS CE NUMÉRO

- 143 Editorial *Kseniya Garaschuk*  
144 In Memoriam *Robert Dawson*  
145 MathemAttic: No. 14  
    145 Problems: MA66–MA70  
    149 Solutions: MA41–MA45  
153 Problem Solving Vignettes: No. 11 *Shawn Godin*  
159 Olympiad Corner: No. 382  
    159 Problems: OC476–OC480  
    161 Solutions: OC451–OC455  
169 Michel Bataille’s Focus On. . . Index  
175 Problems: 4531–4540  
181 Bonus Problems: B1–B25  
185 Solutions: 4481–4490

---

## **Crux Mathematicorum**

Founding Editors / Rédacteurs-fondateurs: Léopold Sauvé & Frederick G.B. Maskell  
Former Editors / Anciens Rédacteurs: G.W. Sands, R.E. Woodrow, Bruce L.R. Shawyer,  
Shawn Godin

## **Crux Mathematicorum with Mathematical Mayhem**

Former Editors / Anciens Rédacteurs: Bruce L.R. Shawyer, James E. Totten, Václav Linek,  
Shawn Godin

---

## EDITORIAL

Math in the Time of Coronavirus. While we find ourselves adjusting many of our habits, changing our everyday activities due to various necessary restrictions, for me, engaging in mathematics offered a kind of repose and feeling of normalcy. I now teach via videoconferencing with a toddler in the background and hold research meetings over the phone while walking my dog. However, my *Cruz* work has changed very little, and I am indeed grateful for that. So if you too are looking for a mathematical distraction from the pandemic, look no further.

This issue has a couple of non-standard features. First, Chris Fisher has put together a comprehensive index for Michel Bataille's *Focus On ...* column. There, you will find columns arranged according to topics (Algebra, Geometry, Inequalities, Calculus, Combinatorics, Trigonometry) with citations and short content descriptions. Secondly, in this issue we have 25 Bonus Problems. While we have high standards for problem acceptance, we simply receive too many good problems. As we try to balance each issue's problem offerings between authors and topics, we inevitably acquire a backlog. To ensure that no problem stays in the waiting-to-be-published stage for too long, we will be occasionally publishing a Bonus Problems list. This gives authors a chance to cite their problems, while providing our readers with more materials. Please note that this material is truly bonus: we will not be considering solutions to these problems.

Stay healthy and safe.

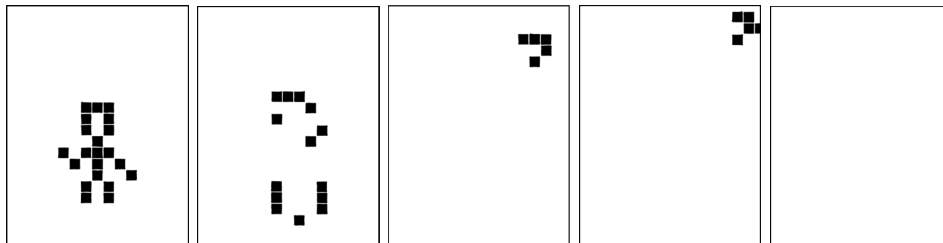
Kseniya Garaschuk

## IN MEMORIAM

Fans of recreational mathematics will mourn the recent death of John H. Conway. While many of his important discoveries in geometry and group theory can't be explained without many hours of lead-in, (even the grand antiprism is fairly mindboggling) and even the many of our readers will have experimented with Conway's "Game of Life." Maybe you have read "On Numbers and Games", or the more popular "Winning Ways" which he coauthored with Elwyn Berlekamp and Richard Guy (by sad coincidence, all three authors of this tour de force have died within a little over a year of each other.) Maybe at some point you learned his "Doomsday Rule" for finding the day of the week of any day in history, or how to win at Nim or Hackenbush. However it happened, whatever it was: so many of us are the richer for John's time among us, and if you aren't yet - it's not too late!

Randall Munroe's XKCD webcomic gave John the rare tribute of a memorial cartoon. Here are some snapshots by Mr. Munroe's generous permission. For the full animation, see [https://imgs.xkcd.com/comics/rip\\_john\\_conway.gif](https://imgs.xkcd.com/comics/rip_john_conway.gif)

Robert Dawson



# MATHEMATTIC

No. 14

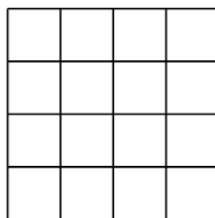
The problems featured in this section are intended for students at the secondary school level.

*Click here to submit solutions, comments and generalizations to any problem in this section.*

To facilitate their consideration, solutions should be received by **June 15, 2020**.

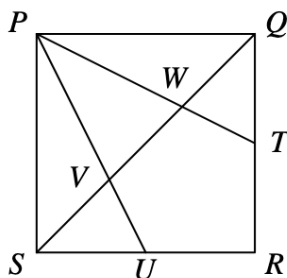


**MA66.** The 16 small squares shown in the diagram each have a side length of 1 unit. How many pairs of vertices (intersections of lines) are there in the diagram whose distance apart is an integer number of units?

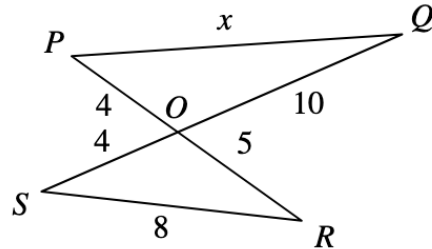


**MA67.** Consider numbers of the form  $10n + 1$ , where  $n$  is a positive integer. We shall call such a number *grime* if it cannot be expressed as the product of two smaller numbers, possibly equal, both of which are of the form  $10k + 1$ , where  $k$  is a positive integer. How many grime numbers are there in the sequence 11, 21, 31, 41, ..., 981, 991?

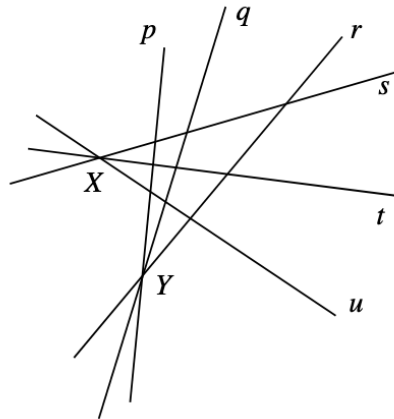
**MA68.**  $PQRS$  is a square. The points  $T$  and  $U$  are the midpoints of  $QR$  and  $RS$  respectively. The line  $QS$  cuts  $PT$  and  $PU$  at  $W$  and  $V$  respectively. What fraction of the area of the square  $PQRS$  is the area of the pentagon  $RTWVU$ ?



**MA69.** The diagram shows two straight lines  $PR$  and  $QS$  crossing at  $O$ . What is the value of  $x$ ?



**MA70.** Challengeborough's underground train network consists of six lines,  $p, q, r, s, t, u$ , as shown. Wherever two lines meet, there is a station which enables passengers to change lines. On each line, each train stops at every station. Jessica wants to travel from station  $X$  to station  $Y$ . She does not want to use any line more than once, nor return to station  $X$  after leaving it, nor leave station  $Y$  having reached it. How many different routes, satisfying these conditions, can she choose?



.....

Les problèmes proposés dans cette section sont appropriés aux étudiants de l'école secondaire.

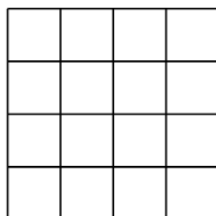
**Cliquez ici afin de soumettre vos solutions, commentaires ou généralisations aux problèmes proposés dans cette section.**

Pour faciliter l'examen des solutions, nous demandons aux lecteurs de les faire parvenir au plus tard le **15 juin 2020**.

La rédaction souhaite remercier Rolland Gaudet, professeur titulaire à la retraite à l'Université de Saint-Boniface, d'avoir traduit les problèmes.

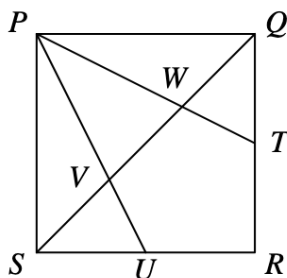


**MA66.** Les 16 petits carrés illustrés ci-bas sont tous de côtés 1 unité. Combien de paires de sommets se trouvent à une distance entière d'unités?

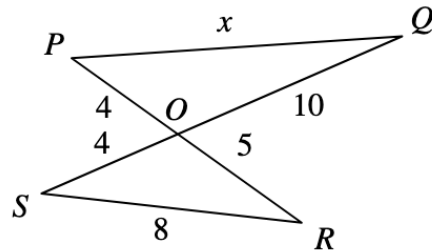


**MA67.** Soient les entiers de la forme  $10n + 1$ , où  $n$  est entier positif. Un tel nombre est dit *remier* s'il n'est pas possible de le représenter comme produit de deux plus petits entiers possiblement égaux, toujours de la forme  $10k + 1$  où  $k$  serait entier positif. Combien de nombres premiers y a-t-il parmi 11, 21, 31, 41, ..., 981, 991?

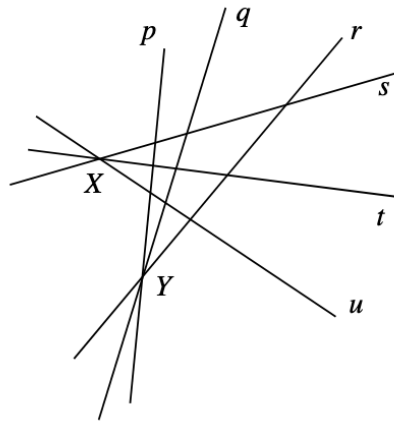
**MA68.**  $PQRS$  est un carré. Les points  $T$  et  $U$  sont les mi points de  $QR$  et  $RS$  respectivement. La ligne  $QS$  intersecte  $PT$  et  $PU$  en  $W$  et  $V$  respectivement. Quelle fraction de la surface du carré  $PQRS$  est occupée par le pentagone  $RTWVU$ ?



**MA69.** Le diagramme ci-bas montre deux lignes  $PR$  et  $QS$  intersectant en  $O$ . Quelle est la valeur de  $x$ ?



**MA70.** Le métro de Winnibourg consiste de six lignes,  $p, q, r, s, t, u$ , telles qu'indiquées ci-bas. Lorsque deux lignes se rencontrent, on y retrouve une station permettant de changer de ligne. De plus, le métro s'arrête à toute station sur sa ligne. Jéhane désire voyager de la station  $X$  à la station  $Y$ . Mais elle refuse d'utiliser une quelconque ligne plus qu'une fois, en plus de ne jamais revenir une deuxième fois à la station  $X$ , ni de quitter la station  $Y$  après y être arrivée. Déterminer le nombre de telles routes différentes.

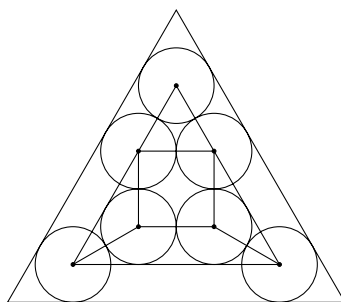




# MATHEMATTIC SOLUTIONS

Statements of the problems in this section originally appear in 2019: 45(9), p. 495–496.

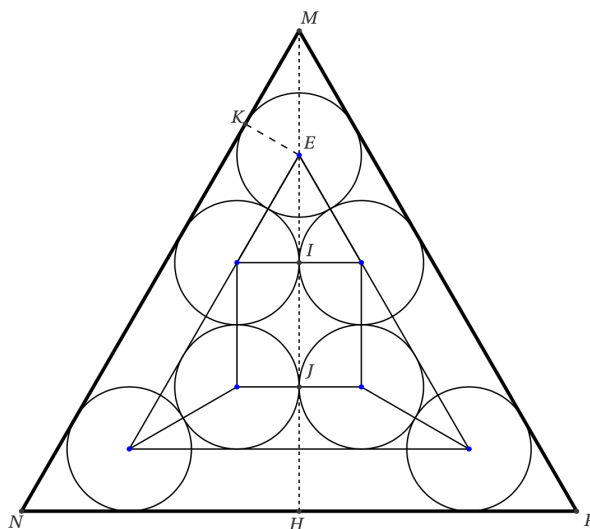
**MA41.** The diagram shows the densest packing of seven circles in an equilateral triangle.



Determine the exact fraction of the area of the triangle that is covered by the circles.

Originally from “Shaking Hands in Corner Brook and Other Math Problems” by Peter Booth, Bruce Sawyer and John Grant McLoughlin.

We received 7 submissions, of which 6 were correct and complete. We present the solution by Dominique Mouchet, modified by the editor.



On prend 1 comme longueur du côté du grand triangle équilatéral. On notera  $R$  le rayon des cercles. Exprimons la hauteur  $MH$  en fonction de  $R$ :

- le triangle  $MKE$  a pour angles  $90 - 60 - 30$  et  $EK = R$ . Donc  $ME = 2R$ .
- $EI$  est la hauteur d'un triangle équilatéral de côté  $2R$ . Donc

$$EI = 2R \cdot \frac{\sqrt{3}}{2} = R\sqrt{3}.$$

- $IJ = JH = 2R$ .

Donc

$$MH = ME + EI + IJ + IH = 2R + R\sqrt{3} + 2R + 2R = R(6 + \sqrt{3}).$$

Comme  $MH = \frac{\sqrt{3}}{2}$ , on obtient

$$R = \frac{\sqrt{3}}{2(6 + \sqrt{3})} = \frac{\sqrt{3}(6 - \sqrt{3})}{2 \cdot 33} = \frac{2\sqrt{3} - 1}{22}.$$

La fraction  $p$  de la surface du triangle couverte par les 7 triangles est donc:

$$p = \frac{7\pi R^2}{\frac{\sqrt{3}}{4}} = \frac{28\pi}{\sqrt{3}} \left( \frac{13 - 4\sqrt{3}}{484} \right) = \frac{7\pi}{363} (13\sqrt{3} - 12) \approx 0.6371.$$

**MA42.** Find all functions of the form  $f(x) = \frac{a + bx}{b + x}$  where  $a$  and  $b$  are constants such that  $f(2) = 2f(5)$  and  $f(0) + 3f(-2) = 0$ .

*Originally Question 2 of 1980 J.I.R. McKnight Mathematics Scholarship Paper.*

*We received 8 submissions, all of which were correct and complete. We present the solution by José Luis Díaz-Barrero, modified by the editor.*

The condition gives us that

$$\frac{a + 2b}{b + 2} = 2 \left( \frac{a + 5b}{b + 5} \right) \quad \text{and} \quad \frac{a}{b} + 3 \left( \frac{a - 2b}{b - 2} \right) = 0.$$

The above results in the nonlinear system of equations:

$$\begin{aligned} 8b^2 + (10 + a)b - a &= 0, \\ 6b^2 - 4ab + 2a &= 0. \end{aligned} \tag{1}$$

The resultant of the above system is

$$-4a(a + 1)(19a - 300).$$

Substituting the zeros of  $a$  in the above we see that  $(a, b) = (0, 0)$ ,  $(a, b) = (-1, -1)$  and  $(a, b) = (300/19, 10/19)$  solve (1). Thus

$$f(x) = 0, \quad f(x) = \frac{1+x}{1-x}, \quad \text{and} \quad f(x) = \frac{300+10x}{10+19x},$$

are the only functions which satisfy the stated condition.

**MA43.** If  $n$  is not divisible by 4, prove that  $1^n + 2^n + 3^n + 4^n$  is divisible by 5 for any positive integer  $n$ .

*Adapted from Problem 2 of the 1901 Competition in Hungarian Problem Book 1 (1963).*

*We received 13 submissions, all of which were correct and complete. We present the generalized solution by the Problem Solving Group from Missouri State University, modified by the editor.*

We will show, more generally, that if  $p$  is any prime number and  $n$  is a positive integer then

$$1^n + 2^n + 3^n + \dots + (p-1)^n$$

is a multiple of  $p$  if and only if  $n$  is not divisible by  $p-1$ .

It is well known that since  $p$  is prime, there is an element  $\alpha \in \mathbb{Z}_p$  (a primitive root) such that for all  $i \in \mathbb{Z}_p$ ,  $i = \alpha^k$  for some integer  $k$ , with  $0 \leq k \leq p-2$ . Therefore

$$\sum_{i=1}^{p-1} i^n \equiv \sum_{k=0}^{p-2} (\alpha^k)^n \equiv \sum_{k=0}^{p-2} (\alpha^n)^k.$$

Note that  $\alpha^n \equiv 1 \pmod{p}$  if and only if  $n$  is a multiple of  $p-1$ .

We prove both directions:

$\Rightarrow$  (Contrapositive) If  $n$  is a multiple of  $p-1$ ,  $\alpha^n \equiv 1 \pmod{p}$  and

$$\sum_{i=1}^{p-1} i^n \equiv \sum_{k=0}^{p-2} (\alpha^n)^k \equiv \sum_{k=0}^{p-2} 1 \equiv p-1 \not\equiv 0 \pmod{p}.$$

Thus our sum is not a multiple of  $p$ .

$\Leftarrow$  If  $n$  is not a multiple of  $p-1$ ,  $\alpha^n - 1 \not\equiv 0 \pmod{p}$ , so  $\alpha^n - 1 \in \mathbb{Z}_p$ . Using the formula for finite geometric series (with  $b = \alpha^n$ ), we have

$$\sum_{i=1}^{p-1} i^n \pmod{p} \equiv \sum_{k=0}^{p-2} (\alpha^n)^k \pmod{p} \equiv (b^{p-1} - 1)(b-1)^{-1} \pmod{p} \equiv 0 \pmod{p}.$$

Thus our sum is a multiple of  $p$ .

We observe the original problem considers the case when  $p = 5$ .

**MA44.** Find the largest positive integer which divides all expressions of the form  $n^5 - n^3$  where  $n$  is a positive integer. Justify your answer.

*Proposed by John McLoughlin.*

*We received 11 submissions, all of which were correct and complete. We present the joint solution by the Problem Solving Group from Missouri State University and Tianqi Jiang (solved independently), modified by the editor.*

First note that when  $n = 2$ , we have that  $2^5 - 2^3 = 24$ . Thus the number we seek must be a factor of 24.

We show  $3 \mid n^5 - n^3$ . As  $n^5 - n^3 = n^3(n+1)(n-1)$  is divisible by three consecutive integers, it follows one of these numbers is a multiple of 3. Thus  $3 \mid n^5 - n^3$ .

We show  $8 \mid n^5 - n^3$  by considering cases. If  $n = 2k$ , then

$$n^5 - n^3 = (2k)^3(2k+1)(2k-1) = 8k^3(2k+1)(2k-1).$$

Thus  $8 \mid n^5 - n^3$ . If  $n = 2k + 1$ , then

$$n^5 - n^3 = (2k+1)^3(2k+2)(2k) = (2k+1)^3 \cdot 2^2 \cdot k \cdot (k+1).$$

As one of  $k$  or  $k + 1$  is even, it follows  $8 \mid n^5 - n^3$ .

Since 3 and 8 are relatively prime,  $24 \mid n^5 - n^3$ . As we established 24 as an upper bound, our proof is complete.

**MA45.** A sequence  $s_1, s_2, \dots, s_n$  is harmonic if the reciprocals of the terms are in arithmetic sequence. Suppose  $s_1, s_2, \dots, s_{10}$  are in harmonic sequence. Given  $s_1 = 1.2$  and  $s_{10} = 3.68$ , find  $s_1 + s_2 + \dots + s_{10}$ .

*Originally Question 11 of 1988 Illinois CTM, State Finals AA.*

*We received 2 submissions, both correct and complete. We present the solution by Dobby Kastanya.*


The arithmetic sequence of interest is  $a_1, a_2, \dots, a_{10}$  where

$$s_1 = \frac{1}{a_1}, s_2 = \frac{1}{a_2}, \dots, s_{10} = \frac{1}{a_{10}}.$$

From the problem statement, we know that  $a_1 = \frac{1}{1.2} = \frac{5}{6}$  and  $a_{10} = \frac{1}{3.68} = \frac{100}{368}$ .

For the arithmetic sequence, there are eight items in between  $a_1$  and  $a_{10}$  with equal spacing. Turning the denominator for these two values to 9936, we get  $a_1 = \frac{8280}{9936}$  and  $a_{10} = \frac{2700}{9936}$ . The spacing between two numbers is  $\frac{620}{9936}$ . With this knowledge, the other items can be determined:  $a_2 = \frac{7660}{9936}$ ,  $a_3 = \frac{7040}{9936}$ , up to  $a_9 = \frac{3320}{9936}$ .

The corresponding values of  $s_1$  through  $s_{10}$  can be easily calculated. Finally, the sum of  $s_1$  through  $s_{10}$  is calculated as 20.46.



# PROBLEM SOLVING VIGNETTES

No. 11

Shawn Godin

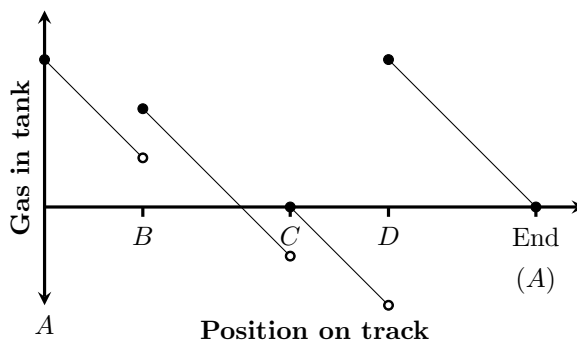
## Picking Representations

In many cases, a problem's solution is aided by thinking about the problem in a different way than it was originally presented. This may be by looking at a different, but related problem whose solution leads back to the original. We can also think about a problem differently by choosing some other way to represent it. Analytic geometry is an example, where we can think of geometric problems algebraically or algebraic problems geometrically.

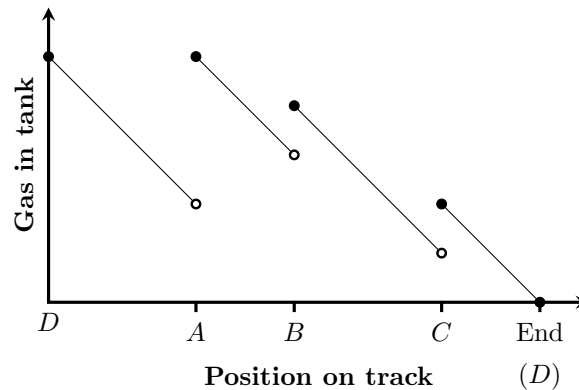
When I thought about this topic the following problem came to mind:

*A gas powered go-cart is empty and on a track. Around the track are a number of gas cans. The total amount of gas in all the cans is equal to the amount of gas needed to go around the track once. Show that, no matter how the gas and cans are distributed, you can find a place to start so that you can make it all the way around the track.*

I was introduced to this problem by *CruX* Editorial Board member Ed Barbeau at a workshop he did for teachers over 20 years ago. It's one of those problems you can convince yourself must work, but coming up with an airtight argument that convinces others is another thing. The key to the insightful solution that was given by Ed was to imagine that we are allowed to have a "negative" amount of gas in our tank. Then the graph of the gas in our tank versus the distance driven will be a piecewise linear function where all the pieces of the graph will have equal, negative slopes; there will be a step discontinuity at the location of each gas can; and when we have finished one trip around the track our tank will, again, be empty.



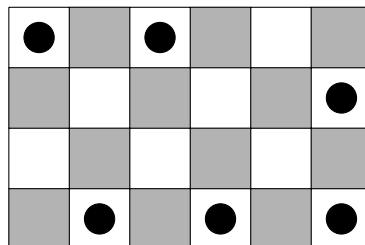
Thus if we draw the graph and find the lowest point, this will be the place that we should start.



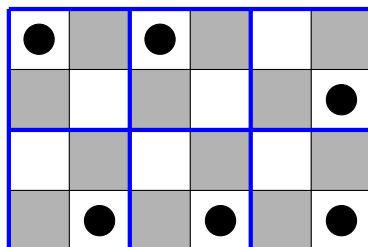
For example, in the graphs above, we are assuming that there are four gas cans  $A$ ,  $B$ ,  $C$ , and  $D$ . If we start at can  $A$ , we get the first graph above on the previous page. Thus, we see that we should have started at can  $D$ , which would have given us the second graph above.

Choosing the graphical representation not only helped make our argument clearer, it also gave way to the solution. Now, let's consider Problem 3 from the 2019 Canadian Mathematical Olympiad:

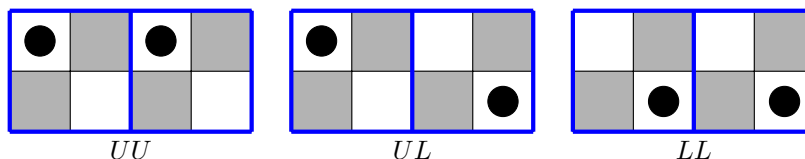
*Let  $m$  and  $n$  be positive integers. A  $2m \times 2n$  grid of squares is coloured in the usual chessboard fashion. Find the number of ways of placing  $mn$  counters on the white squares, at most one counter per square, so that no two counters are on white squares that are diagonally adjacent. An example of a way to place the counters when  $m = 2$  and  $n = 3$  is shown below.*



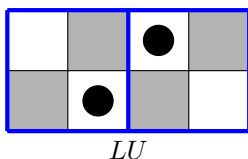
Since counters cannot be on diagonally adjacent squares, any  $2 \times 2$  square drawn on the grid can only contain at most one counter. This suggests partitioning the grid into  $2 \times 2$  squares, as in the diagram below. Since there are  $\frac{(2m)(2n)}{(2)(2)} = mn$   $2 \times 2$  squares on the grid, each of these squares will have exactly one counter.



Notice that there are two configurations that the  $2 \times 2$  squares can be in: either the counter can be in the upper corner ( $U$ ), or the lower corner ( $L$ ). When we look at two  $2 \times 2$  squares beside each other we see that  $UU$ ,  $UL$  and  $LL$  are all valid configurations.



On the other hand the configuration  $LU$  is not allowed.



Similarly, going from top to bottom we can have  $U$  followed by  $U$  or  $L$ , but  $L$  can only be followed by another  $L$ . Hence, our original  $2m \times 2n$  grid was replaced with an  $m \times n$  grid of  $2 \times 2$  squares, which in turn can be replaced by an  $m \times n$  grid filled with the symbols  $U$  and  $L$ .

The original example can now be replaced with

$U$	$U$	$L$
$L$	$L$	$L$

Notice that in any row or column we have a number of  $U$ s (possibly none) followed by a number of  $L$ s. Once an  $L$  appears in a row or column, all entries to the right and below it are also  $L$ s. Thus starting from the top row and proceeding downward, each new row has at least as many  $L$ s as the row above it, and possibly more.

Considering the setup from the example in the problem statement, in which a  $4 \times 6$  starting grid reduces to a  $2 \times 3$  grid of  $U$ s and  $L$ s, we can readily construct the 10 ways that the grid can be filled and count the number of  $L$ s in each row (the case in bold blue is the example from the problem statement).

U	U	U	0	U	U	U	0	U	U	U	0	U	U	U	0	L	L	L	3
U	U	U	0	U	U	L	1	U	L	L	2	L	L	L	3	L	L	L	3
U	U	L	1	U	U	L	1	U	U	L	1	U	L	L	2	U	L	L	2
U	U	L	1	U	L	L	2	L	L	L	3	U	L	L	2	U	L	L	2
U	L	L	2	L	L	L	3	L	L	L	3	L	L	L	3	L	L	L	3
L	L	L	3	L	L	L	3	L	L	L	3	L	L	L	3	L	L	L	3

Thus we can think of our problem in another way: a sequence of two non-negative integers representing the number of *L*s in each row. For the configuration considered above these would be:

$$0, 0; \quad 0, 1; \quad 0, 2; \quad 0, 3; \quad 1, 1; \quad 1, 2; \quad 1, 3; \quad 2, 2; \quad 2, 3; \quad 3, 3.$$

Notice that, to satisfy the conditions of the problem, all of these sequences are non-decreasing, containing numbers less than or equal to 3 (the number of columns). Thus our problem is equivalent to finding the number of non-decreasing sequences of  $m$  terms chosen (possibly with repetition) from the set  $\{0, 1, 2, \dots, n\}$ . In the example that would be the number of non-decreasing sequences of 2 terms from the set  $\{0, 1, 2, 3\}$ .

We will choose another representation to attack the sequence problem. Since my numbers can be as large as 3, we will use 3 stars. Since we have 2 terms, we will use 2 bars. We will arrange these 5 symbols in some order, like

$$*|**|$$

This arrangement is interpreted by counting all the stars to the left of the leftmost bar, 1, and all the stars to the left of the rightmost bar, 3. Hence the arrangement above represents the non-decreasing sequence of 2 terms from the set  $\{0, 1, 2, 3\}$ : 1, 3. Each sequence is represented by a unique arrangement of stars and bars, and each arrangement of stars and bars corresponds to a unique sequence. Hence counting the number of arrangements of 3 stars and 2 bars gives us the solution to the configuration in the problem statement.

We can count the number of ways to arrange the 3 stars and 2 bars in several ways to get  $\frac{5!}{3!2!} = 10$ . This can be interpreted as arranging 5 things, 3 of one type (stars) and 2 of another (bars). We can also interpret this as we have 5 positions to put our symbols and we must choose 3 of them to put the stars, leaving the rest of the places for bars. Alternatively, we could have picked the places for the bars first yielding  $\binom{5}{2} = \binom{5}{3} = 10$ .

Returning to the problem, in the general case we have a  $2m \times 2n$  grid of squares filled with counters. We are representing this by a non-decreasing sequence of  $m$  numbers, where each number is less than or equal to  $n$ , which represents the number of *L*'s in our smaller grid. Converting this to  $m$  bars and  $n$  stars, we get



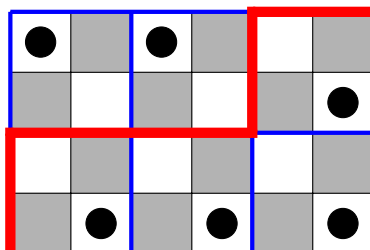
the total number of ways our task can be completed is

$$\binom{m+n}{m} = \binom{m+n}{n} = \frac{(m+n)!}{m!n!}.$$

It is worthwhile to go back to the problem and convince yourself that you would get the same result with these slight variations on our technique:

- Counting the number of non-increasing sequences representing the number of  $U$ s in each row.
- Counting the number of non-increasing sequences representing the number of  $U$ s in each column.
- Counting the number of non-decreasing sequences representing the number of  $L$ s in each column.

The official solution to the problem uses a slightly different approach. It also notices the differences between the  $U$ s and  $L$ s and notes that the boundary separating these two types of  $2 \times 2$  cells makes a path from the lower left corner of the big grid to the upper right corner, travelling either to the right or up. The original example with the boundary highlighted in red is in the diagram below. As an exercise, you may want to solve the problem using this representation.



Keep in mind that sometimes changing your point of view through a different representation of the problem may lead you to a solution. You may want to check out the seventh number of this column, *Counting Carefully* [2019: 386-389], where the stars and bars technique was used in a slightly different way. For your enjoyment, here are the rest of the problems from the 2019 Canadian Mathematical Olympiad.

### The 2019 Canadian Mathematical Olympiad

1. Amy has drawn three points in a plane,  $A$ ,  $B$ , and  $C$ , such that  $AB = BC = CA = 6$ . Amy is allowed to draw a new point if it is the circumcenter of a triangle whose vertices she has already drawn. For example, she can draw the circumcenter  $O$  of triangle  $ABC$ , and then afterwards she can draw the circumcenter of triangle  $ABO$ .

- (a) Prove that Amy can eventually draw a point whose distance from a previously drawn point is greater than 7.
- (b) Prove that Amy can eventually draw a point whose distance from a previously drawn point is greater than 2019.


(Recall that the circumcenter of a triangle is the center of the circle that passes through its three vertices.)

2. Let  $a$  and  $b$  be positive integers such that  $a+b^3$  is divisible by  $a^2+3ab+3b^2-1$ . Prove that  $a^2+3ab+3b^2-1$  is divisible by the cube of an integer greater than 1.
4. Let  $n$  be an integer greater than 1, and let  $a_0, a_1, \dots, a_n$  be real numbers with  $a_1 = a_{n-1} = 0$ . Prove that for any real number  $k$ ,

$$|a_0| - |a_n| \leq \sum_{i=0}^{n-2} |a_i - ka_{i+1} - a_{i+2}|.$$

5. David and Jacob are playing a game of connecting  $n \geq 3$  points drawn in a plane. No three of the points are collinear. On each player's turn, he chooses two points to connect by a new line segment. The first player to complete a cycle consisting of an odd number of line segments loses the game. (Both endpoints of each line segment in the cycle must be among the  $n$  given points, not points which arise later as intersections of segments.) Assuming David goes first, determine all  $n$  for which he has a winning strategy.

The author would like to thank Ed Barbeau for reminding him about the details of the go-cart problem and providing valuable feedback that greatly improved the article.




# OLYMPIAD CORNER

No. 382

The problems in this section appeared in a regional or national mathematical Olympiad.

*Click here to submit solutions, comments and generalizations to any problem in this section*

To facilitate their consideration, solutions should be received by **June 15, 2020**.



**OC476.** Let  $x$  be a real number such that both sums  $S = \sin 64x + \sin 65x$  and  $C = \cos 64x + \cos 65x$  are rational numbers. Prove that in one of these sums, both terms are rational.

**OC477.** Let  $A = \{z \in \mathbb{C} \mid |z| = 1\}$ .

(a) Prove that  $(|z + 1| - \sqrt{2})(|z - 1| - \sqrt{2}) \leq 0 \forall z \in A$ .

(b) Prove that for any  $z_1, z_2, \dots, z_{12} \in A$ , there is a choice of signs “ $\pm$ ” so that

$$\sum_{k=1}^{12} |z_k \pm 1| < 17.$$

**OC478.** Consider two noncommuting matrices  $A, B \in \mathcal{M}_2(\mathbb{R})$ .

(a) Knowing that  $A^3 = B^3$ , prove that  $A^n$  and  $B^n$  have the same trace for any nonzero natural number  $n$ .

(b) Give an example of two noncommuting matrices  $A, B \in \mathcal{M}_2(\mathbb{R})$  such that for any nonzero  $n \in \mathbb{N}$ ,  $A^n \neq B^n$ , and  $A^n$  and  $B^n$  have different trace.


**OC479.** We say that the function  $f : \mathbb{Q}_+^* \rightarrow \mathbb{Q}$  has the property  $\mathcal{P}$  if

$$f(xy) = f(x) + f(y) \quad \forall x, y \in \mathbb{Q}_+^*.$$

(a) Prove that there do not exist injective functions with property  $\mathcal{P}$ .

(b) Do there exist surjective functions with property  $\mathcal{P}$ ?

**OC480.** In the plane, there are points  $C$  and  $D$  on the same region with respect to the line defined by the segment  $AB$  so that the circumcircles of triangles  $ABC$  and  $ABD$  are the same. Let  $E$  be the incenter of triangle  $ABC$ , let  $F$  be the incenter of triangle  $ABD$  and let  $G$  be the midpoint of the arc  $AB$  not containing the points  $C$  and  $D$ . Prove that points  $A, B, E, F$  are on a circle with center  $G$ .



Les problèmes présentés dans cette section ont déjà été présentés dans le cadre d'une olympiade mathématique régionale ou nationale.

*Cliquez ici afin de soumettre vos solutions, commentaires ou généralisations aux problèmes proposés dans cette section.*

Pour faciliter l'examen des solutions, nous demandons aux lecteurs de les faire parvenir au plus tard le **15 juin 2020**.

La rédaction souhaite remercier Rolland Gaudet, professeur titulaire à la retraite à l'Université de Saint-Boniface, d'avoir traduit les problèmes.

---

**OC476.** Soit  $x$  un nombre réel tel que les deux sommes  $S = \sin 64x + \sin 65x$  et  $C = \cos 64x + \cos 65x$  sont rationnelles. Démontrer que dans une des sommes, les deux termes sont rationnels.

**OC477.** Soit  $A = \{z \in \mathbb{C} \mid |z| = 1\}$ .

(a) Démontrer que  $(|z + 1| - \sqrt{2})(|z - 1| - \sqrt{2}) \leq 0 \quad \forall z \in A$ .

(b) Démontrer que pour tout  $z_1, z_2, \dots, z_{12} \in A$ , il existe un choix de signes “ $\pm$ ” tels que

$$\sum_{k=1}^{12} |z_k \pm 1| < 17.$$

**OC478.** Soient deux matrices qui ne commutent pas,  $A, B \in \mathcal{M}_2(\mathbb{R})$ .

(a) Si  $A^3 = B^3$ , démontrer que  $A^n$  et  $B^n$  ont la même trace  $\forall n \in \mathbb{N}$ ,  $n \neq 0$ .

(b) Donner un exemple de deux matrices qui ne commutent pas,  $A, B \in \mathcal{M}_2(\mathbb{R})$ , telles que, pour tout non nul  $n \in \mathbb{N}$ ,  $A^n \neq B^n$ , puis  $A^n$  et  $B^n$  sont de différentes traces.

**OC479.** La fonction  $f : \mathbb{Q}_+^* \rightarrow \mathbb{Q}$  possède la propriété  $\mathcal{P}$  si

$$f(xy) = f(x) + f(y) \quad \forall x, y \in \mathbb{Q}_+^*.$$

(a) Démontrer qu'il n'existe aucune fonction injective possédant la propriété  $\mathcal{P}$ .

(b) Des fonctions surjectives avec la propriété  $\mathcal{P}$  existent-elles?

**OC480.** Soient  $C$  et  $D$  deux points dans le même demi plan par rapport au segment  $AB$ , de façon à ce que les cercles circonscrits des triangles  $ABC$  et  $ABD$  soient les mêmes. Soit  $E$  le centre du cercle inscrit du triangle  $ABC$  et soit  $F$  le centre du cercle inscrit du triangle  $ABD$ ; soit aussi  $G$  le milieu de l'arc  $AB$  contenant ni  $C$  ni  $D$ . Démontrer que  $A, B, E, F$  se trouvent sur un cercle de centre  $G$ .

---

# OLYMPIAD CORNER SOLUTIONS

*Statements of the problems in this section originally appear in 2019: 45(10), p. 504–505.*

**OC451.** Determine the least natural number  $a$  such that

$$a \geq \sum_{k=1}^n a_k \cos(a_1 + \cdots + a_k)$$

for any nonzero natural number  $n$  and for any positive real numbers  $a_1, a_2, \dots, a_n$  whose sum is at most  $\pi$ .

*We received 1 submission. We present the solution by Oliver Geupel.*

We show that

$$\sup \left\{ \sum_{k=1}^n a_k \cos(a_1 + \cdots + a_k) : n \geq 1; a_1, \dots, a_k > 0; \sum_{k=1}^n a_k \leq \pi \right\} = 1,$$

which implies that the least value of  $a$  is 1. For  $1 \leq k \leq n$ , let

$$x_k = \sum_{j=1}^k a_j.$$

Then,  $0 = x_0 < x_1 < x_2 < \cdots < x_n \leq \pi$ , and the sum

$$\sum_{k=1}^n a_k \cos(a_1 + \cdots + a_k) = \sum_{k=1}^n (x_k - x_{k-1}) \cos x_k \quad (1)$$

is a right Riemann sum which underestimates the integral

$$I(x_n) = \int_0^{x_n} \cos x \, dx$$

of the decreasing function  $\cos x$  on the interval  $[0, x_n]$ . Since  $I(x_n) = \sin x_n \leq 1$  for every  $x_n \leq \pi$ , we obtain that  $a \leq 1$ . However, if  $a_k = \pi/(2n)$  and  $x_k = k\pi/(2n)$  for any  $1 \leq k \leq n$  then the sequence defined by the sums (1) converges towards  $I(\pi/2) = 1$  as  $n \rightarrow \infty$ . Hence  $a = 1$ .

*Editor's Comment.* The restrictions on  $a_n$ 's can be changed. For example, if

$$a_1 + \cdots + a_n \leq \pi/2,$$

then the value of the upper bound  $a$  is 1, as before. However, if

$$a_1 + \cdots + a_n = \pi,$$

then  $a = 0$ .

**OC452.** Let  $ABCD$  be a square. Consider the points  $E \in AB$ ,  $N \in CD$  and  $F, M \in BC$  such that triangles  $AMN$  and  $DEF$  are equilateral. Prove that  $PQ = FM$ , where  $\{P\} = AN \cap DE$  and  $\{Q\} = AM \cap EF$ .

We received 11 correct submissions. We present two solutions.

*Solution 1, by Miguel Amengual Covas.*

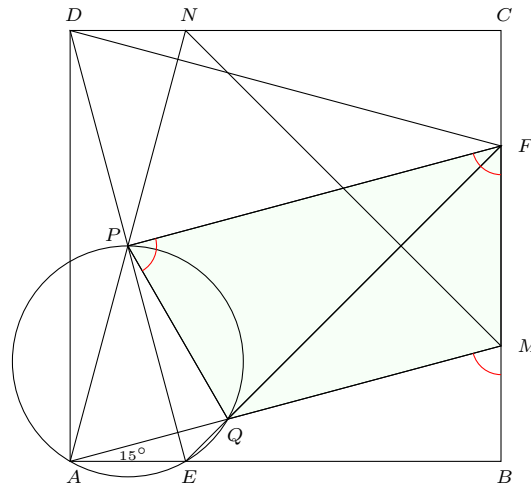
The right-angled triangles  $ABM$  and  $ADN$  have equal hypotenuses  $AM$  and  $AN$ , and the legs  $AB$  and  $AD$  are respectively equal. Thus  $\triangle ABM$  and  $\triangle ADN$  are congruent with  $\angle MAB = \angle NAD$ .

Now,  $\angle DAB = \angle MAB + \angle NAM + \angle NAD$ . Next, since  $\angle DAB = 90^\circ$  and  $\angle NAM = 60^\circ$ , it follows that  $\angle MAB$  and  $\angle NAD$  are each  $15^\circ$ . Analogously,  $\angle CDF = \angle ADE = 15^\circ$ .

Clearly, then,  $\triangle ABM$ ,  $\triangle CDF$ ,  $\triangle DAE$ ,  $\triangle ADN$  are congruent (these are right-angled triangles which have equal legs  $AB$ ,  $CD$  and  $DA$  and contain another pair of equal angles) with

$$AE = BM = FC = ND.$$

Consequently,  $AEND$  is a rectangle, so that the segments  $AN$  and  $DE$  bisect each other. Thus  $P$  is the midpoint of segment  $DE$ . Then, we have in equilateral triangle  $DEF$  that  $\angle FPE$  is a right angle and  $\angle PFE = 30^\circ$ .



Subtracting  $AE = FC$  from both sides of  $AB = BC$  gives  $AB - AE = BC - FC$ . This makes  $EB = BF$  and consequently  $\triangle EBF$  is an isosceles right-triangle with  $\angle EFB = 45^\circ$ . Therefore,

$$\begin{aligned} \angle PFM = \angle PFB &= \angle PFE + \angle EFB &= 30^\circ + 45^\circ \\ &= 75^\circ \\ &= 90^\circ - 15^\circ \\ &= 90^\circ - \angle MAB \\ &= \angle AMB, \end{aligned}$$

implying that  $PF$  is parallel to  $AM$ , that is,  $PF \parallel QM$ .

Next,  $PQ$  subtends  $60^\circ$  angles at  $A$  and  $E$ , making  $PAEQ$  cyclic and on chord  $EQ$  we have

$$\angle QPE = \angle QAE = \angle MAB = 15^\circ$$

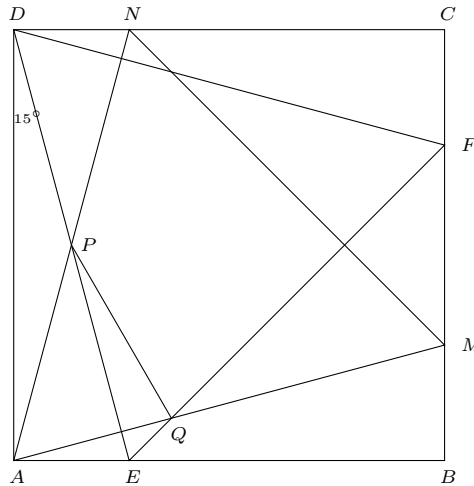
and

$$\angle FPQ = \angle FPE - \angle QPE = 90^\circ - 15^\circ = 75^\circ.$$

That is to say, the exterior angle  $QMB$  in quadrilateral  $PQMF$  is equal to the interior and opposite angle  $P$ . Thus  $PQMF$  is cyclic. Since  $PF \parallel QM$ ,  $PQMF$  is an isosceles trapezium. The conclusion follows.

*Solution 2, by Miguel Amengual Covas.*

As in Solution 1, we conclude that  $\angle MAB = \angle NAD = \angle CDF = \angle ADE = 15^\circ$ .



Suppose (wlog) the unity of measurement equal to the length of the side of the given square. Then

$$DN = AE = BM = CF = \tan 15^\circ. \tag{1}$$

Hence,

$$FM = BC - CF - MB = 1 - 2 \tan 15^\circ. \tag{2}$$

Moreover, since  $AE \parallel DN$ ,  $AEND$  is a rectangle, so that segments  $AN$  and  $DE$  bisect each other. Therefore,  $P$  is the midpoint of  $DE$  and we have

$$PE = \frac{1}{2}DE = \frac{1}{2 \cos 15^\circ}. \tag{3}$$

Observing that the equal segments  $FB$  and  $BE$  make  $EBF$  an isosceles right-angled triangle, the exterior angle theorem, applied to  $\triangle AEQ$  at  $E$ , yields

$$\angle EQA = \angle QEB - \angle QAE = \angle FEB - \angle MAB = 45^\circ - 15^\circ = 30^\circ.$$

Now, the law of sines asserts that

$$\frac{QE}{\sin 15^\circ} = \frac{AE}{\sin 30^\circ},$$

and therefore

$$\frac{QE}{\sin 15^\circ} = 2 \cdot AE,$$

yielding (by (2))

$$QE = \frac{2 \sin^2 15^\circ}{\cos 15^\circ}. \quad (4)$$

Applying the law of cosines to  $\triangle PEQ$  we get

$$PQ^2 = PE^2 + QE^2 - 2 \cdot PE \cdot QE \cdot \cos 60^\circ.$$

Substituting for  $PE$  and  $QE$  from (4) and (5),

$$PQ^2 = \frac{1}{4 \cos^2 15^\circ} + \frac{4 \sin^4 15^\circ}{\cos^2 15^\circ} - \tan^2 15^\circ. \quad (5)$$

Now, we write the identity  $2 \sin 30^\circ = 1$  in the equivalent form  $4 \sin 15^\circ \cos 15^\circ = 1$ , multiply it by  $\tan 15^\circ$  and square, obtaining  $16 \sin^4 15^\circ = \tan^2 15^\circ$ . Hence we can rewrite (6) as

$$PQ^2 = \frac{1 + \tan^2 15^\circ}{4 \cos^2 15^\circ} - \tan^2 15^\circ,$$

or, equivalently,

$$PQ^2 = \frac{1}{4 \cos^4 15^\circ} - \tan^2 15^\circ.$$

This, in turn, is equivalent to

$$PQ^2 = \frac{1 - 4 \sin^2 15^\circ \cos^2 15^\circ}{4 \cos^4 15^\circ} = \frac{1 - \sin^2 30^\circ}{4 \cos^4 15^\circ} = \frac{3}{16 \cos^4 15^\circ}.$$

Thus

$$PQ = \frac{\sqrt{3}}{4 \cos^2 15^\circ} = \sqrt{3} \tan 15^\circ. \quad (6)$$

Taking into account that  $\tan 15^\circ = 2 - \sqrt{3}$ , from (3) and (7) we conclude that

$$FM = 2\sqrt{3} - 3 = PQ.$$



**OC453.** Let  $n \geq 2$  be an integer and let  $A, B \in \mathcal{M}_n(\mathbb{C})$ . If  $(AB)^3 = O_n$ , is it true that  $(BA)^3 = O_n$ ? Justify your answer.

We received 4 correct submissions. We present two solutions.

*Solution 1, by Oliver Geupel.*

We prove that the deduction is correct if and only if  $n \leq 3$ .

First, let  $n \leq 3$  and let  $\lambda$  be an eigenvalue of the matrix  $C = BA$  with eigenvector  $v$ . Then,  $\lambda v = Cv$  and

$$\lambda^4 v = C \cdot \lambda^3 v = C^2 \cdot \lambda^2 v = C^3 \cdot \lambda v = C^4 v = B(AB)^3 Av = BO_n Av = O_n.$$

Hence  $\lambda = 0$ . So 0 is the only eigenvalue of  $C$ . The characteristic polynomial of  $C$  is then  $\lambda^n$ . By the Cayley-Hamilton theorem, the matrix  $C$  satisfies its own characteristic equation, so that  $C^n = O_n$  and therefore  $(BA)^3 = C^3 = O_n$ .

We now turn to the case where  $n \geq 4$ . Let

$$A_4 = \begin{bmatrix} 0 & 0 & 0 & 1 \\ 0 & 0 & 1 & 0 \\ 0 & 1 & 0 & 0 \\ 0 & 0 & 0 & 0 \end{bmatrix}, \quad B_4 = \begin{bmatrix} 0 & 0 & 1 & 0 \\ 0 & 1 & 0 & 0 \\ 1 & 0 & 0 & 0 \\ 0 & 0 & 0 & 0 \end{bmatrix}.$$

Consider the  $n$ -by- $n$  block matrices

$$A = \begin{bmatrix} A_4 & O_{4 \times (n-4)} \\ O_{(n-4) \times 4} & O_{(n-4) \times (n-4)} \end{bmatrix}, \quad B = \begin{bmatrix} B_4 & O_{4 \times (n-4)} \\ O_{(n-4) \times 4} & O_{(n-4) \times (n-4)} \end{bmatrix}.$$

Straightforward computations yield  $(A_4 B_4)^3 = O_4$  and

$$(B_4 A_4)^3 = \begin{bmatrix} 0 & 0 & 0 & 1 \\ 0 & 0 & 0 & 0 \\ 0 & 0 & 0 & 0 \\ 0 & 0 & 0 & 0 \end{bmatrix}$$

Thus,

$$(AB)^3 = \begin{bmatrix} (A_4 B_4)^3 & O_{4 \times (n-4)} \\ O_{(n-4) \times 4} & O_{(n-4) \times (n-4)} \end{bmatrix} = O_n$$

and

$$(BA)^3 = \begin{bmatrix} (B_4 A_4)^3 & O_{4 \times (n-4)} \\ O_{(n-4) \times 4} & O_{(n-4) \times (n-4)} \end{bmatrix} \neq O_n.$$

This completes the proof.

*Solution 2, by Missouri State University Problem Solving Group.*

We prove a more general result. Fix  $k \geq 1$ . Then

- (1) If  $n \leq k$  then  $(AB)^k = 0$  implies  $(BA)^k = 0$ .
- (2) If  $n \geq k + 1$  then there exist  $n \times n$  matrices  $A$  and  $B$  such that  $(AB)^k = 0$  but  $(BA)^k \neq 0$ .

Suppose  $n \leq k$  and  $(AB)^k = 0$ . Every eigenvalue of  $AB$  is 0 and the characteristic polynomial of  $AB$  is  $x^n$ . But  $AB$  and  $BA$  have the same characteristic polynomial, hence  $(BA)^k = 0$ . This proves (1).

(2) Let  $n = k + 1$ , let  $A$  be the  $n \times n$  matrix whose  $(i, j)$  entry is 1 if and only if  $i = j > 1$  and 0 otherwise, and let  $B$  be the  $n \times n$  matrix whose  $(i, j)$  entry is 1 if and only if  $j = i + 1$  and 0 otherwise. Then  $BA = B$  and  $AB = C$  where the  $(i, j)$  entry of  $C$  is 1 if and only if  $j = i + 1 > 2$  and 0 otherwise.

A direct calculation yields  $(AB)^{n-1} = 0$ , but  $(BA)^{n-1}$  is non-zero. By taking the direct sum of  $A$  and  $B$  with the zero matrix, we can get counterexamples for all larger  $n$ .

For the original problem with  $k = 3$ , we take  $n = 4$  and get

$$A = \begin{pmatrix} 0 & 0 & 0 & 0 \\ 0 & 1 & 0 & 0 \\ 0 & 0 & 1 & 0 \\ 0 & 0 & 0 & 1 \end{pmatrix} \quad \text{and} \quad B = \begin{pmatrix} 0 & 1 & 0 & 0 \\ 0 & 0 & 1 & 0 \\ 0 & 0 & 0 & 1 \\ 0 & 0 & 0 & 0 \end{pmatrix}.$$

Then

$$AB = \begin{pmatrix} 0 & 0 & 0 & 0 \\ 0 & 0 & 1 & 0 \\ 0 & 0 & 0 & 1 \\ 0 & 0 & 0 & 0 \end{pmatrix} \quad \text{and} \quad (AB)^3 = \begin{pmatrix} 0 & 0 & 0 & 0 \\ 0 & 0 & 0 & 0 \\ 0 & 0 & 0 & 0 \\ 0 & 0 & 0 & 0 \end{pmatrix},$$

but

$$BA = \begin{pmatrix} 0 & 1 & 0 & 0 \\ 0 & 0 & 1 & 0 \\ 0 & 0 & 0 & 1 \\ 0 & 0 & 0 & 0 \end{pmatrix} \quad \text{and} \quad (BA)^3 = \begin{pmatrix} 0 & 0 & 0 & 1 \\ 0 & 0 & 0 & 0 \\ 0 & 0 & 0 & 0 \\ 0 & 0 & 0 & 0 \end{pmatrix}.$$

**OC454.** Find all the functions  $f : \mathbb{N} \rightarrow \mathbb{N}$  having the following property for each natural number  $m$ : if  $d_1, d_2, \dots, d_n$  are all the divisors of the number  $m$ , then

$$f(d_1)f(d_2) \cdots f(d_n) = m.$$

*We received 8 submissions. We present the solution by Oliver Geupel.*

It is readily checked that the following function is a solution to the problem:

$$f(m) = \begin{cases} p & \text{if } m = p^k \text{ where } p \text{ is a prime number and } k \geq 1 \\ 1 & \text{otherwise.} \end{cases}$$

We show that there are no other solutions. Suppose  $f$  is any solution.

Putting  $m = 1$  in the given condition, we obtain  $f(1) = 1$ . Setting  $m = p$  where  $p$  is a prime number in the given condition, we get  $f(p) = f(1)f(p) = p$ . A straightforward induction shows that  $f(p^k) = p$  for  $k \geq 1$ .

Finally, let  $m$  have at least two distinct prime divisors, say  $m = p_1^{k_1} p_2^{k_2} \cdots p_\ell^{k_\ell}$ , where  $p_1, \dots, p_\ell$  are distinct prime divisors ( $\ell \geq 2$ ) and  $k_j \geq 1$  for  $1 \leq j \leq \ell$ . Let  $D$  denote the set of those divisors of  $m$  that have at least two distinct prime divisors. Then,

$$m = f(1) \left( \prod_{\substack{1 \leq j \leq \ell \\ 1 \leq i \leq k_j}} f(p_j^i) \right) \left( \prod_{d \in D} f(d) \right) = \left( \prod_{1 \leq j \leq \ell} p_j^{k_j} \right) \left( \prod_{d \in D} f(d) \right) = m \prod_{d \in D} f(d).$$

Hence,

$$\prod_{d \in D} f(d) = 1.$$

It follows  $f(d) = 1$  for all  $d \in D$ . Since  $m \in D$ , we conclude that  $f(m) = 1$ .

**OC455.** Let  $D$  be a point on the base  $AB$  of an isosceles triangle  $ABC$ . Select a point  $E$  so that  $ADEC$  is a parallelogram. On the line  $ED$ , take a point  $F$  such that  $E \in DF$  and  $EB = EF$ . Prove that the length of the chord that the line  $BE$  cuts on the circumcircle of triangle  $ABF$  is twice the length of the segment  $AC$ .

*We received 4 submissions. We present the solution by Ivko Dimitrić.*

Without loss of generality, we may assume that the vertices are labeled counter-clockwise and that  $|DB| \leq |AD|$ . Let  $\omega$  be the circumcircle of  $\triangle ABF$ ,  $O$  its center and  $K$  the point where the line  $BE$  meets  $\omega$  again. Let  $M$  be the midpoint of  $BK$ ,  $S$  the midpoint of  $BF$  and  $N = \overleftrightarrow{CE} \cap \overleftrightarrow{BF}$ . Further, set

$$\alpha = \angle CAB = \angle CBA = \angle ECB, \quad \theta = \angle FBE = \angle EFB \quad \text{and} \quad \varphi = \angle ECM.$$

To prove the claim, it suffices to show that  $\triangle CBM$  is isosceles.

From parallelogram  $ADEC$  we have  $\angle CED = \alpha$  and from isosceles  $\triangle BFE$  we get  $\angle DEB = 2\theta$ , so that  $\angle CEB = \alpha + 2\theta$ . The points  $O, E$  and  $S$  are collinear, because  $BE = EF$  and  $E, O$  belong to the perpendicular bisector of  $BF$  at  $S$ . Since  $|DB| \leq |AD|$  the foot of the perpendicular from  $B$  to  $CN$  belongs to the segment  $\overline{CE}$  just as the foot of the perpendicular from  $C$  to  $AB$  belongs to  $\overline{AD}$ .

That implies that  $\angle BEN \geq 90^\circ$  and  $\angle MEO = \angle BES < 90^\circ$ . Hence,  $S$  is between  $B$  and  $N$  and  $M$  is between  $E$  and  $K$ .

Since  $OM \perp BK$  and  $O$  and  $C$  belong to the perpendicular bisector of  $AB$  we have  $\angle ECO = \angle OME = 90^\circ$  and the quadrilateral  $CEMO$  is cyclic so that

$$\angle ECM = \angle EOM = \varphi \quad \text{and} \quad \angle OEC = \angle OMC.$$

Since the triangles  $ESN$  and  $OEM$  are right-angled we have

$$\begin{aligned} \angle CNB = \angle ENS &= 90^\circ - \angle SEN \\ &= 90^\circ - \angle OEC \\ &= 90^\circ - \angle OMC \\ &= \angle CME = \angle CMB. \end{aligned}$$

Therefore, quadrilateral  $BCM N$  is cyclic so that  $\varphi = \angle NCM = \angle NBM = \theta$ . Now, we have

$$\angle BCM = \angle BCE + \angle ECM = \alpha + \varphi$$


and from  $\triangle CME$  we get

$$\angle CMB = \angle CEB - \angle ECM = (\alpha + 2\theta) - \varphi = \alpha + 2\varphi - \varphi = \alpha + \varphi.$$

Therefore, we conclude that  $\angle BCM = \angle CMB$ , so that

$$AC = CB = MB = \frac{1}{2}BK,$$

proving the claim.



# Focus On ... Index

## Algebra

### 1 Integer Part and Periodicity

**38:3** (Mar 2012) 99-100

A periodic function that vanishes over a period is the zero function. This obvious property can lead to elegant proofs for some identities involving the integer part function.

### 3 From Linear Recurrences to a Polynomial Identity

**38:7** (Sep 2012) 276-277

To determine the set of all sequences  $U_n$  satisfying the linear recurrence  $U_{n+2} = xU_{n+1} - yU_n$ , a direct approach (instead of the classical method) leads to a general polynomial identity.

### 7 Decomposition into Partial Fractions

**39:5** (May 2013) 218-221

Some examples involving minimal calculations to display the usefulness of this algebraic tool.

### 15 A Formula of Euler

**41:1** (Jan 2015) 16-20

Euler observed that the sum  $S(n, m) = \sum_{k=0}^n (-1)^{n-k} \binom{n}{k} k^m$  equals 0 if  $m = 0, 1, \dots, n - 1$  and equals  $n!$  when  $m = n$ .

### 17 Congruences (I)

**41:5** (May 2015) 202-205

In many problems involving integers, an ingenious appeal to congruences can be most helpful. Choosing the appropriate modulus is often the key to a short solution.

### 18 Congruences (II)

**41:7** (Sep 2015) 295-298

Here, the focus is on congruences modulo a prime number, with emphasis on the consequences of three simple, but useful, theorems.

### 23 Vieta's Formulas

**42:7** (Sep 2016) 303-307

The formulas that relate the coefficients of a polynomial to sums and products of its roots can help solve algebra problems and establish inequalities.

## 25 The Long Division of Polynomials

**43:1** (Jan 2017) 16-20

The division algorithm for polynomials can provide the key to solving a variety of algebra problems.

## 26 Degree and Roots of a Polynomial

**43:5** (May 2017) 205-209

The focus here is on the links between the degree of a polynomial and the number of its roots.

## 30 Cauchy's Functional Equation

**44:3** (Mar 2018) 106-109

Solutions to problems involving functional equations often come down to an application of known results about Cauchy's equation. A selection of problems illustrate the various properties under consideration.

## Inequalities

### 5 Inequalities via Lagrange Multipliers

**39:1** (Jan 2013) 24-26

A few examples of problems requiring the proof of a constrained inequality where, with some care, the method of Lagrange Multipliers leads to a simple solution.

### 20 Inequalities via Complex Numbers

**42:1** (Jan 2016) 20-23

Geometric and algebraic inequalities follow from familiar properties of the modulus of a complex number.

### 23 Vieta's Formulas

**42:7** (Sep 2016) 303-307

(See under Algebra.)

### 40 Inequalities via Auxiliary Functions (I)

**46:3** (Mar 2020) 117-122

We illustrate through examples how to verify a given inequality by choosing an appropriate auxiliary function, then using calculus.

## Geometry

### 2 The Geometry Behind the Scene

**38:5** (May 2012) 183-185

An algebra problem can sometimes be simplified if a connection to a corresponding geometry problem can be found.

### 4 The Barycentric Equation of a Line

**38:9** (Nov 2012) 367-368

A geometric look at the coefficients of the barycentric equation of a line in the Euclidean plane, and some applications.

### 6 Glide Reflections in the Plane

**39:3** (Mar 2013) 133-135

A few situations where glide reflections provide insight.

### 8 Generalized Inversion in the Plane

**39:7** (Sep 2013) 307-310

We extend the notion of inversion to include the commutative product of a classical inversion in a circle and the half turn about its center. This provides a unique inversion with center  $O$  exchanging points  $A$  and  $B$  no matter the relative position of the three collinear points.

### 12 Intersecting Circles and Spiral Similarities

**40:5** (May 2014) 203-206

Let the circles  $C_1, C_2$  intersect at points  $U, V$ . Among the spiral similarities transforming  $C_1$  into  $C_2$ , the one with center  $U$  provides a simple way to obtain the image of any point  $P$  of  $C_1$  — it is the second point of intersection of the circle  $C_2$  with the line through  $P$  and  $V$ .

### 13 The Dot Product

**40:7** (Sep 2014) 289-292

The purpose of this essay is to show the dot product at work through alternative solutions to several past geometry problems.

### 16 Leibniz's and Stewart's Relations

**41:3** (Mar 2015) 110-113

Leibniz's relation involves the center of mass of  $n$  weighted points in  $d$ -dimensional Euclidean space. It deserves to be better known; among other things, Stewart's theorem is an easy consequence.

## 21 The Product of Two Reflections in the Plane

42:3 (Mar 2016) 109-113

Knowing that the product of two reflections is either a translation or rotation can help prove geometric theorems and solve geometric problems.

## 22 Constructions on the Sides

42:5 (May 2016) 211-215

We investigate configurations involving triangles or quadrilaterals constructed on the sides of triangles or quadrilaterals, and favor proofs using transformations or complex numbers.

## 27 Some Relations in the Triangle (I)

43:7 (Sep 2017) 293-297

The goal here is to present a selection of less familiar relations among the parts of a triangle that are attractive and useful.

## 28 Some Relations in the Triangle (II)

43:9 (Nov 2017) 389-393

A continuation of Number 27, focusing here on formulas involving lengths related to the classical cevians.

## 32 Harmonic Ranges and Pencils

44:7 (Sep 2018) 291-296

Elementary properties of a harmonic conjugate can lead to simple and elegant solutions to some geometry problems.

## 36 Geometry with Complex Numbers (I)

45:5 (May 2019) 258-264

We focus here on the use of complex numbers to prove results involving a triangle and its circumcircle.

## 37 Geometry with Complex Numbers (II)

45:7 (Sep 2019) 407-412

We continue our discussion from Number 36, here using complex numbers to deal with regular polygons, similarities, and areas.

## 39 Introducing $S_A, S_B, S_C$ in Barycentric Coordinates

46:1 (Jan 2020) 26-31

Barycentric coordinates relative to a triangle are appropriate not just for dealing with affine properties such as collinearity, concurrency, and areas, but they can often be used also for Euclidean properties such as lengths and perpendicularity.



## Calculus

### 5 Inequalities via Lagrange Multipliers

39:1 (Jan 2013) 24-26

(See under Inequalities.)

### 10 Some Sequences of Integrals

40:1 (Jan 2014) 21-24

A study of the sequences  $I_n = \int_0^1 (ax^2 + bx + c)^n dx$  with the goal of finding a sequence  $(\omega_n)$  such that  $\lim_{n \rightarrow \infty} \frac{I_n}{\omega_n} = 1$ .

### 11 The Partial Sums of Some Divergent Series

40:3 (Mar 2014) 112-115

For a sequence  $(a_n)$  of positive real numbers such that  $\lim_{n \rightarrow \infty} \frac{a_{n+1}}{a_n} = \omega > 1$ , and the corresponding sequence of its partial sums  $A_n = \sum_{k=1}^n A_k$ , we establish a few results about the behavior of the sequences  $(A_n)$  and  $\left(\frac{A_{n+1}}{A_n}\right)$  in comparison with the sequences  $(a_n)$  and  $\left(\frac{a_{n+1}}{a_n}\right)$  and offer some applications.

### 15 A Formula of Euler

41:1 (Jan 2015) 16-20

(See under Algebra.)

### 30 Cauchy's Functional Equation

44:3 (Mar 2018) 106-109

(See under Algebra.)

### 31 Mean Value and Rolle's Theorems

44:5 (May 2018) 202-206

The Mean Value Theorem establishes a link between a function and its derivative. Here we will see it at work in various problems, sometimes rather unexpectedly.

### 35 The Asymptotic Behavior of Integrals

45:3 (Mar 2019) 137-143

We keep the same goal as in Number 10 [2014: 21-24] (namely, to determine the asymptotic behavior of a given sequence of integrals), but here, restricting ourselves to elementary problems and methods, present simple ways to obtain such an asymptotic behavior.

## Combinatorics

### 15 A Formula of Euler

41:1 (Jan 2015) 16-20  
(See under Algebra.)

## Trigonometry


### 34 Some Trigonometric Relations

45:1 (Jan 2019) 26-32

We consider a selection of problems involving the values of the circular functions at  $\frac{m\pi}{n}$  for various natural numbers  $m$  and  $n$ . Solutions depend on complex numbers and polynomials in addition to the classical trigonometric identities.

## Solutions to Exercises

9	39:9 (Nov 2013)	404-408	From Numbers 2 to 5.
14	40:9 (Nov 2014)	380-385	From Numbers 6 to 11.
19	41:9 (Nov 2015)	386-391	From Numbers 12 to 16.
24	42:9 (Nov 2016)	393-397	From Numbers 17 to 21.
29	44:1 (Jan 2018)	19-24	From Numbers 22 to 26.
33	44:9 (Nov 2018)	377-381	From Numbers 27 to 31.
38	45:9 (Nov 2019)	511-517	From Numbers 32 to 36.



# PROBLEMS

*Click here to submit problems proposals as well as solutions, comments and generalizations to any problem in this section.*

To facilitate their consideration, solutions should be received by **June 15, 2020**.

**4531.** *Proposed by Leonard Giugiuc and Dan Stefan Marinescu.*

Let  $a, b$  and  $c$  be positive real numbers and let  $x, y$  and  $z$  be real numbers. Suppose that  $a + b + c = 2$  and  $xa + yb + zc = 1$ . Prove that

$$x + y + z - (xy + yz + zx) \geq \frac{3}{4}.$$

**4532.** *Proposed by Marius Stănean.*

Let  $ABC$  be a triangle with circumcircle  $\Gamma$  and let  $M, N, P$  be points on the sides  $BC, CA, AB$ , respectively. Let  $M', N', P'$  be the intersections of  $AM, BN, CP$  with  $\Gamma$  different from the vertices of the triangle. Prove that

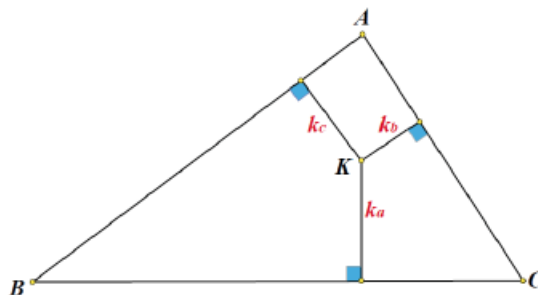
$$MM' \cdot NN' \cdot PP' \leq \frac{R^2 r}{4},$$

where  $R$  and  $r$  are the circumradius and the inradius of triangle  $ABC$ .

**4533.** *Proposed by Leonard Giugiuc and Kadir Altintas.*

Let  $K$  be the symmedian point of  $ABC$ . Let  $k_a, k_b$  and  $k_c$  be the lengths of the altitudes from  $K$  to the sides  $BC, AC$  and  $AB$ , respectively. If  $r$  is the inradius and  $s$  is the semiperimeter, prove that

$$\left(\frac{1}{r}\right)^2 + \left(\frac{3}{s}\right)^2 \geq \frac{2}{k_a^2 + k_b^2 + k_c^2}.$$



**4534.** *Proposed by Michel Bataille.*

For  $n \in \mathbb{N}$ , evaluate

$$\frac{\sum_{k=0}^{\infty} \frac{1}{k!(n+k+1)}}{\sum_{k=0}^{\infty} \frac{(-1)^k}{(n+k+1)!}}.$$

**4535.** *Proposed by Mihaela Berindeanu.*

Let  $ABC$  be an acute triangle with orthocenter  $H$ , and let  $E$  be the reflection of  $H$  in the midpoint  $D$  of side  $BC$ . If the perpendicular to  $DE$  at  $H$  intersects  $AB$  at  $X$  and  $AC$  at  $Y$ , prove that  $HX \cdot EC + YC \cdot HE = EX \cdot BE$ .

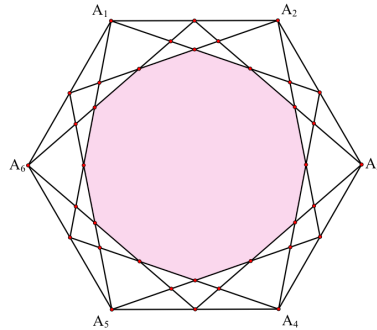
**4536.** *Proposed by Leonard Giugiuc and Rovens Pirkuliev.*

Let  $ABC$  be a triangle with  $\angle ABC = 60^\circ$ . Consider a point  $M$  on the side  $AC$ . Find the angles of the triangle, given that

$$\sqrt{3}BM = AC + \max\{AM, MC\}.$$

**4537.** *Proposed by Arsalan Wares.*

Let  $A$  be a regular hexagon with vertices  $A_1, A_2, A_3, A_4, A_5$  and  $A_6$ . The six midpoints on the six sides of hexagon  $A$  are connected to the six vertices with 12 line segments as shown. The dodecagon formed by these 12 line segments has been shaded. What part of hexagon  $A$  has been shaded?



**4538.** *Proposed by Nguyen Viet Hung.*

Let  $a_1, a_2, \dots, a_n$  be non-negative real numbers. Prove that

$$\sum_{1 \leq i \leq n} \sqrt{1 + a_i^2} + \sum_{1 \leq i < j \leq n} a_i a_j \geq n - 1 + \sqrt{1 + \left( \sum_{1 \leq i \leq n} a_i \right)^2}.$$

When does equality occur?

**4539.** *Proposed by Leonard Giugiuc.*

Let  $ABC$  be a triangle with centroid  $G$ , incircle  $\omega$ , circumradius  $R$  and semiperimeter  $s$ . Show that  $24R\sqrt{6} \geq 25s$  given that  $G$  lies on  $\omega$ .

**4540.** *Proposed by Prithwijit De.*

Given a prime  $p$  and an odd natural number  $k$ , do there exist infinitely many natural numbers  $n$  such that  $p$  divides  $n^k + k^n$ ? Justify your answer.

.....

*Cliquez ici afin de proposer de nouveaux problèmes, de même que pour offrir des solutions, commentaires ou généralisations aux problèmes proposés dans cette section.*

*Pour faciliter l'examen des solutions, nous demandons aux lecteurs de les faire parvenir au plus tard le 15 juin 2020.*

*La rédaction souhaite remercier Rolland Gaudet, professeur titulaire à la retraite à l'Université de Saint-Boniface, d'avoir traduit les problèmes.*

**4531.** *Proposé par Leonard Giugiuc et Dan Stefan Marinescu.*

Soient  $a, b$  et  $c$  des nombres réels positifs et soient  $x, y$  et  $z$  des nombres réels. De plus, supposer que  $a + b + c = 2$  et  $xa + yb + zc = 1$ . Démontrer que

$$x + y + z - (xy + yz + zx) \geq \frac{3}{4}.$$

**4532.** *Proposé par Marius Stănean.*

Soit  $ABC$  un triangle de cercle circonscrit  $\Gamma$  et soient  $M, N, P$  des points situés sur les côtés  $BC, CA, AB$ , respectivement. Soient  $M', N', P'$  les intersections de  $AM, BN, CP$  avec  $\Gamma$ , mais distincts des sommets du triangle. Démontrer que

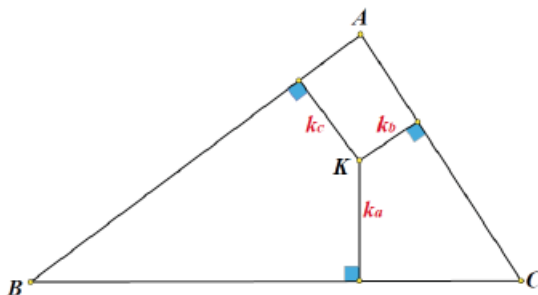
$$MM' \cdot NN' \cdot PP' \leq \frac{R^2 r}{4},$$

où  $R$  et  $r$  sont les rayons du cercle circonscrit, puis du cercle inscrit, du triangle  $ABC$ .

**4533.** *Proposé par Leonard Giugiuc et Kadir Altintas.*

Soit  $K$  un point symédian de  $ABC$ . Soient aussi  $k_a, k_b$  et  $k_c$  les longueurs des altitudes de  $K$  vers les côtés  $BC, AC$  et  $AB$ , respectivement. Si  $r$  est le rayon du cercle inscrit et  $s$  est le demi-périmètre, démontrer que

$$\left(\frac{1}{r}\right)^2 + \left(\frac{3}{s}\right)^2 \geq \frac{2}{k_a^2 + k_b^2 + k_c^2}.$$



**4534.** *Proposé par Michel Bataille.*

Pour  $n \in \mathbb{N}$ , évaluer

$$\frac{\sum_{k=0}^{\infty} \frac{1}{k!(n+k+1)}}{\sum_{k=0}^{\infty} \frac{(-1)^k}{(n+k+1)!}}.$$

**4535.** *Proposé par Mihaela Berindeanu.*

Soit  $ABC$  un triangle acutangle d'orthocentre  $H$  et soit  $E$  la réflexion de  $H$  par rapport au mi point  $D$  du côté  $BC$ . Si la perpendiculaire vers  $DE$  au point  $H$  intersecte  $AB$  en  $X$  et  $AC$  en  $Y$ , démontrer que  $HX \cdot EC + YC \cdot HE = EX \cdot BE$ .

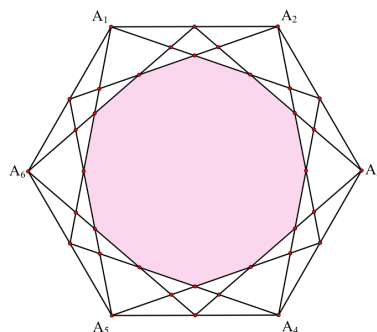
**4536.** *Proposé par Leonard Giugiuc et Rousan Pirkuliev.*

Soit  $ABC$  un triangle tel que  $\angle ABC = 60^\circ$  et soit  $M$  un point sur le côté  $AC$ . Déterminer les angles du triangle, étant donné que

$$\sqrt{3}BM = AC + \max\{AM, MC\}.$$

**4537.** *Proposé par Arsalan Wares.*

Soit  $A$  un hexagone régulier de sommets  $A_1, A_2, A_3, A_4, A_5$  et  $A_6$ . Les six mi points des six côtés de l'hexagone sont reliés aux six sommets, à l'aide de 12 segments, tels qu'indiqués ci-bas, où le dodécagone formé par ces 12 segments est coloré. Quelle fraction de l'hexagone  $A$  est ainsi colorée ?



**4538.** *Proposé par Nguyen Viet Hung.*

Soient  $a_1, a_2, \dots, a_n$  des nombres réels non négatifs. Démontrer que

$$\sum_{1 \leq i \leq n} \sqrt{1 + a_i^2} + \sum_{1 \leq i < j \leq n} a_i a_j \geq n - 1 + \sqrt{1 + \left( \sum_{1 \leq i \leq n} a_i \right)^2}.$$


Quand est-ce que l'égalité tient ?

**4539.** *Proposé par Leonard Giugiuc.*

Soit  $ABC$  un triangle de centroïde  $G$ , de cercle inscrit  $\omega$ , de rayon de cercle circonscrit  $R$  et de demi-périmètre  $s$ . Démontrer que  $24R\sqrt{6} \geq 25s$ , supposant que  $G$  se situe sur  $\omega$ .

**4540.** *Proposé par Prithwijit De.*


À partir d'un nombre premier  $p$  et un entier naturel impair  $k$ , existe-t-il un nombre infini de nombres naturels  $n$  tels que  $p$  divise  $n^k + k^n$ ? Justifier votre réponse.





# BONUS PROBLEMS

These problems appear as a bonus. Their solutions will **not** be considered for publication.



**B1.** *Proposed by Miguel Ochoa Sanchez and Leonard Giugiuc.*

Let  $ABCD$  be a cyclic quadrilateral. Let  $P$  be a point on the arc  $BC$  and let  $L$  and  $Q$  be the feet of perpendiculars dropped from  $P$  on the sides  $AD$  and  $BC$ , respectively. Let  $M$  and  $N$  be the feet of perpendiculars dropped from  $P$  on the lines  $AB$  and  $DC$ , respectively. Prove that

$$\frac{AM}{MB} \cdot \frac{BQ}{QC} \cdot \frac{CN}{ND} \cdot \frac{DL}{LA} = 1.$$

**B2.** *Proposed by Leonard Giugiuc.*

Find the real numbers  $x, y, z$  and  $t$  such that

$$xt - yz = -1 \quad \text{and} \quad x^2 + y^2 + z^2 + t^2 - xz - yt = \sqrt{3}.$$

**B3.** *Proposed by Leonard Giugiuc.*

Let  $a, b$  and  $c$  be positive real numbers such that  $ab + bc + ca = 3$ . Prove the inequality

$$\frac{1}{a^2 + 2} + \frac{1}{b^2 + 2} + \frac{1}{c^2 + 2} \leq 1.$$

**B4.** *Proposed by Leonard Giugiuc.*

Let  $ABC$  be a triangle with no angle exceeding  $120^\circ$  with  $BC = a, AC = b$  and  $AB = c$ . Let  $T$  be its Fermat-Torricelli point, that is the point such that the total distance from the three vertices of  $ABC$  to  $T$  is minimum possible. Prove that

$$(b+c)|TA| + (c+a)|TB| + (a+b)|TC| \geq \sqrt{3}(|TA| + |TB| + |TC|)^2 - 4\text{Area}(ABC).$$

**B5.** *Proposed by Leonard Giugiuc.*

Let  $n$  be an integer such that  $n \geq 4$ . Consider real numbers  $a_k, 1 \leq k \leq n$  such that  $2 \geq a_1 \geq 1 \geq a_2 \geq \dots \geq a_{n-1} \geq a_n$  and  $\sum_{k=1}^n a_k = n$ . Prove that

- a)  $\sum_{k=1}^n a_k^2 \leq n + 2.$
- b)  $\sum_{1 \leq i < j \leq n} a_i a_j \geq \frac{(n-2)(n+1)}{2}.$

**B6.** *Proposed by Leonard Giugiuc.*

Let  $ABC$  be a triangle such that  $\angle BAC \geq \frac{2\pi}{3}$ . Prove that

$$\frac{r}{R} \leq \frac{2\sqrt{3}-3}{2},$$

where  $r$  is the inradius and  $R$  is the circumradius of  $ABC$ .

**B7.** *Proposed by Leonard Giugiuc.*

Let  $a, b, c$  and  $d$  be real numbers such that  $2 \geq a \geq 1 \geq b \geq c \geq d \geq 0$  and  $a + b + c + d = 4$ . Prove that

$$\frac{2}{a^3 + b^3 + c^3 + d^3} + \frac{9}{ab + bc + cd + da + ac + bd} \leq 2.$$

**B8.** *Proposed by Leonard Giugiuc and Dan Stefan Marinescu.*

Let  $ABCD$  be a rectangle with center  $O$ . Let  $M$  and  $P$  be two points in the plane (not necessarily distinct) such that  $O$  lies on the line  $MP$  and  $OM = 3 \cdot OP$ . Prove that

$$MA + MB + MC + MD \geq PA + PB + PC + PD.$$

**B9.** *Proposed by Leonard Giugiuc.*

Let  $a, b, c \geq 1$  and  $0 \leq d, e, f \leq 1$  such that  $a + b + c + d + e + f = 6$ . Prove that

$$6 \leq a^2 + b^2 + c^2 + d^2 + e^2 + f^2 \leq 18.$$

**B10.** *Proposed by Leonard Giugiuc.*

Let  $ABC$  be a nonobtuse triangle with smallest angle  $A$ . Prove that

$$\cos(B - C) \geq \cos B + \cos C$$

and determine when equality holds.

**B11.** *Proposed by Michael Rozenberg and Leonard Giugiuc.*

Prove that if  $a, b, c$  and  $d$  are non-negative real numbers such that  $a + b + c + d = 4$ , then

$$ab + bc + cd + da + ac + bd \geq 3\sqrt{(a^2 + b^2 + c^2 + d^2)abcd}.$$

**B12.** *Proposed by Leonard Giugiuc.*

Let  $x, y$  and  $z$  be positive real numbers such that  $xyz = 512$ . Prove that

$$\frac{1}{\sqrt{1+x}} + \frac{1}{\sqrt{1+y}} + \frac{1}{\sqrt{1+z}} \geq 1.$$

**B13★.** *Proposed by Leonard Giugiuc.*

Let  $n$  be an integer with  $n \geq 4$ . Prove or disprove that for any positive real numbers  $a_i, i = 1, 2, \dots, n$  that sum up to 1, we have:

$$\sqrt[n]{(1 - a_1^n)(1 - a_2^n) \cdots (1 - a_n^n)} \geq (n^n - 1)a_1 a_2 \cdots a_n.$$

**B14★.** *Proposed by Leonard Giugiuc.*

Let  $k$  be a real number with  $k > \frac{7+3\sqrt{5}}{2}$ . Prove or disprove that for any non-negative real numbers  $x, y, z$  no two of which are zero, we have

$$\sqrt{\frac{x}{ky+z}} + \sqrt{\frac{y}{kz+x}} + \sqrt{\frac{z}{kx+y}} \geq \frac{3}{\sqrt{k+1}}.$$

**B15.** *Proposed by Leonard Giugiuc.*

Let  $a, b$  and  $c$  be real numbers such that  $a \geq b \geq 1 \geq c \geq 0$  and  $a + b + c = 3$ .

- a) Show that  $2 \leq ab + bc + ca \leq 3$ .
- b) Prove that  $a^3 + b^3 + c^3 + \frac{45}{a^2+b^2+c^2} \leq 18$  and study the equality cases.

**B16.** *Proposed by Dao Thanh Oai and Leonard Giugiuc.*

Let  $ABCD$  be a cyclic quadrilateral. Prove that the following two statements are equivalent:

- a)  $AC \geq BD$ ,
- b)  $AB \cdot AD + CB \cdot CD \geq BA \cdot BC + DA \cdot DC$ .

**B17.** *Proposed by Dao Thanh Oai and Leonard Giugiuc.*

Let  $ABCD$  be a cyclic quadrilateral. Prove that

$$AB + AC + AD + BC + BD + CD \leq 4R(\sqrt{2} + 1),$$

where  $R$  is the circumradius of  $ABCD$ .

**B18.** *Proposed by Leonard Giugiuc and Dorin Marghidanu.*

Let  $n \geq 2$  be a natural number, and  $a_k$  be real numbers such that  $0 < a_k < 2$  for all  $k = 1, 2, \dots, n$  with  $\prod_{k=1}^n a_k = 1$ . Prove that

$$\sum_{k=1}^n \frac{1}{\sqrt{1+a_k}} \leq \frac{n}{\sqrt{2}}.$$

Prove further that the condition  $a_k < 2$  can be dropped when  $n = 2$  or  $n = 3$ .

**B19.** *Proposed by Leonard Giugiuc.*

Find the maximum value  $k$  such that

$$a^2 + b^2 + c^2 + k(ab + bc + ca) \geq 3 + k(a + b + c)$$

for any positive numbers  $a, b$  and  $c$  such that  $abc = 1$ .

**B20\*** *Proposed by Leonard Giugiuc.*

Let  $x, y \in (0, 3/2)$  be real numbers that satisfy  $(x - 2)(y - 2) = 1$ . Prove or disprove that

$$x^3 + y^3 \geq 2.$$

**B21.** *Proposed by Marian Cucoanes and Leonard Giugiuc.*

Consider an arbitrary triangle  $ABC$  with medians  $m_a, m_b, m_c$ , circumradius  $R$ , inradius  $r$  and exradii  $r_a, r_b, r_c$ . Show that

$$m_a + m_b + m_c \leq \sqrt{16R^2 + 4rR + 9r^2} \leq r_a + r_b + r_c.$$

**B22.** *Proposed by Leonard Giugiuc.*

Let  $a, b, c, d, e, f$  be non-negative real numbers such that  $a + b + c + d + e + f = 4$ . If  $a \geq b \geq c \geq 1 \geq d \geq e \geq f \geq 0$ , prove that

$$a^2 + b^2 + c^2 + d^2 + e^2 + f^2 + 180abcdef \leq 10.$$

**B23.** *Proposed by Miguel Ochoa Sanchez and Leonard Giugiuc.*

Given a triangle  $ABC$ , let the tangent to its circumcircle at  $A$  intersect the line  $BC$  at  $D$ , and let the circle through  $A$  that is tangent to  $BC$  at  $D$  intersect the circumcircle again at  $E$ . Prove that  $\frac{EB}{EC} = \left(\frac{AB}{AC}\right)^3$ .

**B24.** *Proposed by Ruben Dario Auqui and Leonard Giugiuc.*

Let  $ABCD$  be a square. Let  $\omega$  be the circle centered at  $A$  with radius  $AB$ . A point  $M$  lies inside the square on  $\omega$ ; the line  $BM$  intersects the side  $CD$  at  $N$ . Prove that  $CM = 2MN$  if and only if  $CM$  and  $BN$  are perpendicular.

**B25.** *Proposed by Ruben Dario Auqui and Leonard Giugiuc.*

Let  $ABC$  be a triangle with semiperimeter  $s$ . The  $A$ -excircle of the triangle touches the side  $BC$  at  $Q$  and the lines  $AB$  and  $AC$  at  $M$  and  $N$ , respectively. Suppose that  $AQ$  intersects  $MN$  at  $P$ . Prove that

$$AP = \frac{s\sqrt{a(s-a)(as+(b-c)^2)}}{b(s-c) + c(s-b)}.$$

# SOLUTIONS

*No problem is ever permanently closed. The editor is always pleased to consider for publication new solutions or new insights on past problems.*

*Statements of the problems in this section originally appear in 2019: 45(9), p. 518–523.*

**4481.** *Proposed by Warut Suksompong.*

Find all functions  $f : \mathbb{R} \rightarrow \mathbb{R}$  such that

$$f(x^2 + y^2) = f(x + y)f(x - y) + 2f(y)y$$

for all  $x, y \in \mathbb{R}$ .

*We received 16 submissions, of which 7 were correct and complete. We present the solution by Michel Bataille.*

There are three functions that satisfy the equation:

- $f_0(x) = 0$  for all  $x \in \mathbb{R}$ ,
- $f_1(x) = x$ ,
- $f_2(x) = 0$  for  $x \neq 0$  and  $f_2(0) = 1$ .

The functions  $f_0, f_1$  are obvious solutions. As for the function  $f_2$ , consider first the case when  $x^2 + y^2 = 0$ . Then  $x = y = 0$  and

$$f_2(x^2 + y^2) = f_2(0) = 1 = f_2(0)f_2(0) + 2f_2(0) \cdot 0 = f_2(x + y)f_2(x - y) + 2f_2(y)y.$$

If  $x^2 + y^2 \neq 0$ , then  $x + y$  and  $x - y$  cannot equal 0 both, hence  $f_2(x + y)f_2(x - y) = 0$  and  $2f_2(y)y = 0$  (since  $f_2(y) = 0$  if  $y \neq 0$ ) so that the required functional equation still holds and  $f_2$  is also a solution.

Conversely, let  $f$  be an arbitrary solution. For convenience, we let  $E(x, y)$  denote the equality  $f(x^2 + y^2) = f(x + y)f(x - y) + 2f(y)y$ . From  $E(0, 0)$  we deduce that  $f(0) = (f(0))^2$ , hence  $f(0) = 0$  or  $f(0) = 1$ .

First, suppose that  $f(0) = 0$ . From  $E(x, x)$  and  $E(x, -x)$  we obtain

$$2xf(x) = -2xf(-x) = f(2x^2),$$

so that  $f(-x) = -f(x)$  if  $x \neq 0$  and  $f$  is an odd function. With the help of this result and comparing  $E(x, y)$  and  $E(y, x)$ , we get that

$$f(x + y)f(x - y) = xf(x) - yf(y)$$

for all  $x, y$ . Taking  $y = 0$ , this yields  $(f(x))^2 = xf(x)$  and so  $f(x) = 0$  or  $f(x) = x$  for all  $x$ . If  $f \neq f_0$ , we have  $f(a) = a \neq 0$  for some  $a$ . Now, we consider  $x \neq 0$  and assume that  $f(x) = 0$ . Then,  $f(x + a)f(x - a) = xf(x) - a^2 = -a^2 \neq 0$

and we must have  $f(x+a) = x+a$  and  $f(x-a) = x-a$ . But it follows that  $(x+a)(x-a) = -a^2$ , contradicting  $x \neq 0$ . In consequence  $f(x) = x$  and we can conclude that  $f = f_0$  or  $f = f_1$  in the case when  $f(0) = 0$ .

Second, suppose  $f(0) = 1$ . Again  $E(x, x)$  and  $E(x, -x)$  give  $xf(x) = -xf(-x)$  so that  $f(-x) = -f(x)$  whenever  $x \neq 0$ . Comparing  $E(x, y)$  and  $E(y, x)$  now gives  $f(x+y)f(x-y) = xf(x) - yf(y)$  when  $x \neq y$ . To conclude, consider  $x \neq 0$ . Then  $y = -\frac{x}{2} \neq \frac{x}{2}$ , hence

$$f\left(\frac{x}{2} + \frac{x}{2}\right)f\left(\frac{x}{2} - \frac{x}{2}\right) = \frac{x}{2}f\left(\frac{x}{2}\right) + \frac{x}{2}f\left(-\frac{x}{2}\right),$$

that is,  $f(x) = 0$ . Thus,  $f = f_2$  when  $f(0) = 1$  and the proof is complete.

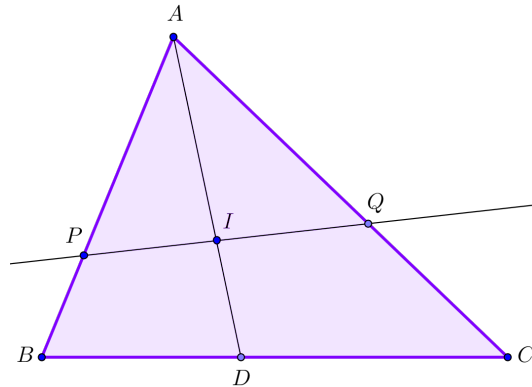
*Editor's comments.* With respect to incorrect solutions, there were two common errors: to note that if  $f(0) = 0$  then for  $x \neq 0$  it must be true that either  $f(x) = x$  or  $f(x) = 0$ , but to omit the explanation of why only one of these statements must hold for all  $x \neq 0$ , and to miss the solution which has  $f(0) = 1$ .

**4482.** *Proposed by Miguel Ochoa Sanchez and Leonard Giugiuc.*

Let  $ABC$  be a triangle with incenter  $I$ . The line  $AI$  intersects  $BC$  at  $D$ . A line  $l$  passes through  $I$  and intersects the sides  $AB$  and  $AC$  at  $P$  and  $Q$ , respectively. Show that

$$AC \cdot \frac{[BDIP]}{[API]} + AB \cdot \frac{[CDIQ]}{[AQI]} = 2 \cdot BC + \frac{BC^2}{AB + AC},$$

where square brackets denote area.



*All 18 of the submissions we received provided complete solutions; we feature the solution by Marie-Nicole Gras.*

We put

$$a = BC, b = CA, c = AB, u = AP, v = AQ,$$

and use the label  $A$  to also denote the angles  $\angle BAC = \angle PAQ$ . The desired result is a consequence of the following known facts:

$$AD = \frac{2bc}{b+c} \cos \frac{A}{2}, \quad AI = \frac{2bc}{a+b+c} \cos \frac{A}{2}, \quad \text{so that } \frac{AD}{AI} = \frac{a+b+c}{b+c}.$$

Moreover, since  $PQ$  passes through  $I$ ,  $AI$  is the internal bisector of the angle at  $A$  in  $\triangle PAQ$ , so that

$$AI = \frac{2uv}{u+v} \cos \frac{A}{2} = \frac{2bc}{a+b+c} \cos \frac{A}{2}, \quad \text{which implies } \frac{u+v}{uv} = \frac{a+b+c}{bc}.$$

Putting these facts together, we have

$$\begin{aligned} b \frac{[BDIP]}{[API]} + c \frac{[CDIQ]}{[AQI]} &= b \frac{[ABD] - [API]}{[API]} + c \frac{[ACD] - [AQI]}{[AQI]} \\ &= b \frac{cAD \sin \frac{A}{2} - uAI \sin \frac{A}{2}}{uAI \sin \frac{A}{2}} + c \frac{bAD \sin \frac{A}{2} - vAI \sin \frac{A}{2}}{vAI \sin \frac{A}{2}} \\ &= \frac{bc}{u} \frac{AD}{AI} + \frac{bc}{v} \frac{AD}{AI} - b - c \\ &= bc \frac{AD}{AI} \left( \frac{u+v}{uv} \right) - b - c \\ &= bc \frac{a+b+c}{b+c} \frac{a+b+c}{bc} - b - c \\ &= \frac{(a+b+c)^2}{b+c} - (b+c) \\ &= \frac{(a+b+c)^2 - (b+c)^2}{b+c} \\ &= \frac{a(a+2b+2c)}{b+c} = 2a + \frac{a^2}{b+c} = 2BC + \frac{BC^2}{AB+AC}. \end{aligned}$$

**4483.** *Proposed by Paul Bracken.*

For non-negative integers  $m$  and  $n$ , evaluate the following sum in closed form

$$\sum_{j=0}^m j^2 \binom{j+n}{j}.$$

*We received 15 solutions, all correct. We present the solution by Marie-Nicole Gras.*

We will use the hockey-stick identity

$$\sum_{k=0}^m \binom{n+k}{n} = \binom{m+n+1}{n+1}.$$

For all  $m, n \geq 0$  let  $S_{m,n} = \sum_{j=0}^m j^2 \binom{j+n}{j}$ . We have

$$\begin{aligned} S_{m,n} &= \sum_{j=0}^m [j + j(j-1)] \binom{n+j}{n} \\ &= \sum_{j=1}^m j \binom{n+j}{n} + \sum_{j=2}^m j(j-1) \binom{n+j}{n} \\ &= \sum_{j=1}^m (n+1) \binom{n+j}{n+1} + \sum_{j=2}^m (n+1)(n+2) \binom{n+j}{n+2} \\ &= (n+1) \sum_{k=0}^{m-1} \binom{n+1+k}{n+1} + (n+1)(n+2) \sum_{k=0}^{m-2} \binom{n+2+k}{n+2}. \end{aligned}$$

Apply the hockey-stick identity to each sum to get

$$S_{m,n} = (n+1) \binom{m+n+1}{n+2} + (n+1)(n+2) \binom{m+n+1}{n+3}.$$

**4484.** *Proposed by Leonard Giugiuc and Michael Rozenberg.*

Let  $a, b, c \in [0, 2]$  such that  $a + b + c = 3$ . Prove that

$$4(ab + bc + ac) \leq 12 - ((a-b)(b-c)(c-a))^2$$

and find when the equality holds.

*We received nine submissions, eight of which are correct and the other is incomplete. We present the solution by Digby Smith, modified slightly by the editor.*

Without loss of generality we may assume that  $a \geq b \geq c$ .

Let  $x = a - b$ ,  $y = b - c$ , and  $z = a - c$ . Then  $x, y, z \geq 0$  and  $x + y = z \leq 2$ . Hence,  $4xy \leq (x + y)^2 \leq 4$  so  $xy \leq 1$ , with equality if and only if  $x = y = 1$ .

Next, note that

$$\begin{aligned} xy - (x + y)^2 &= xy - z(x + y) = xy - yz - zx \\ &= (a-b)(b-c) + (b-c)(c-a) + (c-a)(a-b) \\ &= (ab + bc + ca) - (a^2 + b^2 + c^2) \\ &= (ab + bc + ca) - ((a+b+c)^2 - 2(ab + bc + ca)) \\ &= 3((ab + bc + ca) - 3). \end{aligned} \tag{1}$$



By (1), the given inequality is equivalent in succession to

$$\begin{aligned} 12((ab + bc + ca) - 3) + 3(a - b)^2(b - c)^2(c - a)^2 &\leq 0, \\ 4(xy - (x + y)^2) + 3x^2y^2(x + y)^2 &\leq 0, \\ (x + y)^2(4 - 3x^2y^2) - 4xy &\geq 0. \end{aligned} \quad (2)$$

Finally, since  $xy \leq 1$ , we have

$$\begin{aligned} (x + y)^2(4 - 3x^2y^2) - 4xy &\geq 4xy(4 - 3x^2y^2) - 4xy \\ &= 4xy(3 - 3x^2y^2) \\ &= 12xy(1 - xy)(1 + xy) \geq 0, \end{aligned}$$

so (2) holds and the proof of the inequality is complete. Clearly, equality holds if and only if  $x = y = 0$  or  $x = y = 1$  which implies that  $(a, b, c) = (1, 1, 1)$  or any permutation of  $(2, 1, 0)$ .

**4485.** *Proposed by Jonathan Parker and Eugen J. Ionascu.*

For every square matrix with real entries  $A = [a_{i,j}]_{i=1..n, j=1,2..n}$ , we define the value

$$GM(A) = \max_{\pi \in S_n} \{\min\{a_{1\pi(1)}, a_{2\pi(2)}, \dots, a_{n\pi(n)}\}\}$$

where  $S_n$  is the set of all permutations of the set  $[n] := \{1, 2, 3, \dots, n\}$ .

Given the  $6 \times 6$  matrix

$$A := \begin{bmatrix} 20 & 9 & 7 & 26 & 27 & 13 \\ 19 & 18 & 17 & 6 & 12 & 25 \\ 22 & 24 & 21 & 11 & 20 & 11 \\ 20 & 8 & 9 & 23 & 5 & 14 \\ 22 & 17 & 4 & 10 & 36 & 33 \\ 21 & 16 & 23 & 35 & 15 & 34 \end{bmatrix}$$

find the value  $GM(A)$ .

*There were 11 correct solutions, most straightforward.*

Let  $\pi = (15)(263)$ . Then

$$\begin{aligned} \min\{a_{1,\pi(1)}, a_{2,\pi(2)}, \dots, a_{6,\pi(6)}\} &= \min\{a_{15}, a_{26}, a_{32}, a_{44}, a_{51}, a_{63}\} \\ &= \min\{27, 25, 24, 23, 22, 23\} \\ &= 22. \end{aligned}$$

Therefore  $GM(A) \geq 22$ .

On the other hand, since for each permutation  $\pi$ , the set being minimized contains a number  $a_{\pi^{-1}(1),1}$  from the first column, the minimum cannot exceed 22. Thus  $GM(A) \leq 22$ . Therefore  $GM(A) = 22$ .

**4486.** Proposed by Marian Cucoaneş and Marius Drăgan.

Let  $a, b > 0$ ,  $c > 1$  such that  $a^2 \geq b^2c$ . Compute

$$\lim_{n \rightarrow \infty} (a - b\sqrt{c})(a - b\sqrt[3]{c}) \cdots (a - b\sqrt[n]{c}).$$

We received 12 solutions, one of which was incomplete and one of which was incorrect. We present the solution by Michel Bataille.

Let  $P_n = \prod_{k=2}^n (a - b\sqrt[k]{c})$ . From the hypotheses, we have  $a \geq b\sqrt{c}$ . We show that if  $a = b\sqrt{c}$ , then  $\lim_{n \rightarrow \infty} P_n = 0$  while if  $a > b\sqrt{c}$ , then  $\lim_{n \rightarrow \infty} P_n = \infty$  if  $a > b + 1$  and  $\lim_{n \rightarrow \infty} P_n = 0$  if  $a \leq b + 1$ .

If  $a = b\sqrt{c}$ , then  $P_n = 0$  for all  $n \geq 2$  and so  $\lim_{n \rightarrow \infty} P_n = 0$ .

From now on, we suppose that  $a > b\sqrt{c}$ . Note that  $a > b$  and that  $a - b\sqrt[k]{c} > a - b\sqrt{c} > 0$  for all  $k \geq 2$  (so that  $P_n > 0$  for all  $n \geq 2$ ).

If  $a > b + 1$ , we choose  $m$  such that  $a - b > m > 1$ . Since

$$\frac{P_{n+1}}{P_n} = a - b\sqrt[n+1]{c} \quad \text{and} \quad \lim_{n \rightarrow \infty} \sqrt[n+1]{c} = 1,$$

we have  $\lim_{n \rightarrow \infty} \frac{P_{n+1}}{P_n} = a - b$ . We deduce that for some  $N \in \mathbb{N}$ , we have  $\frac{P_{n+1}}{P_n} > m$  for all  $n \geq N$ . Then, for any  $r \in \mathbb{N}$ , we obtain

$$\frac{P_{N+r}}{P_N} = \frac{P_{N+1}}{P_N} \cdot \frac{P_{N+2}}{P_{N+1}} \cdots \frac{P_{N+r}}{P_{N+r-1}} > m^r$$

and therefore  $P_{N+r} > m^r \cdot P_N$  for all  $r \geq 1$ . Since  $\lim_{r \rightarrow \infty} m^r = \infty$ , we must have  $\lim_{n \rightarrow \infty} P_n = \infty$ .

If  $a < b + 1$ , similarly, we choose  $q$  such that  $a - b < q < 1$  and then for some  $N \in \mathbb{N}$ , we have  $\frac{P_{n+1}}{P_n} < q$  for all  $n \geq N$ . As above we deduce that  $P_{N+r} < q^r P_N$  and so  $\lim_{n \rightarrow \infty} P_n = 0$  (since  $\lim_{r \rightarrow \infty} q^r = 0$ ).

Lastly, suppose that  $a = b + 1$ . Then  $a - b\sqrt[n]{c} = 1 - b(\sqrt[n]{c} - 1)$  and when  $n \rightarrow \infty$ , we have

$$\ln(a - b\sqrt[n]{c}) \sim -b(\sqrt[n]{c} - 1) \sim -\frac{b \ln(c)}{n}$$

(since  $\ln(1 - x) \sim -x$  as  $x \rightarrow 0$  and  $\sqrt[n]{c} - 1 = \exp((\ln(c))/n) - 1 \sim \frac{\ln(c)}{n}$  as  $n \rightarrow \infty$ ).

The series  $\sum_{n \geq 2} \ln(a - b\sqrt[n]{c})$  (whose terms are all negative for  $n$  large enough) is divergent (since  $\sum_{n \geq 2} \frac{1}{n}$  is divergent). This means that  $\lim_{n \rightarrow \infty} \ln(P_n) = -\infty$  and so  $\lim_{n \rightarrow \infty} P_n = 0$ .

**4487.** Proposed by Martin Lukarevski.

Let  $a, b, c$  be the sides of a triangle  $ABC$ ,  $m_a, m_b, m_c$  the corresponding medians and  $R, r$  its circumradius and inradius respectively. Prove that

$$\frac{a^2}{m_b^2 + m_c^2} + \frac{b^2}{m_c^2 + m_a^2} + \frac{c^2}{m_a^2 + m_b^2} \geq \frac{4r}{R}.$$

We received 20 correct solutions. We present the solution by Ioannis Sfikas.

By inequality on page 52 of *Geometric Inequalities* by O. Bottema and R. Z. Djordjevic, we have

$$9R^2 \geq a^2 + b^2 + c^2 \quad \text{or} \quad \frac{1}{3}(a^2 + b^2 + c^2) \geq \frac{1}{27R^2}$$

and

$$2s^2 \geq 27Rr \quad \text{or} \quad 2(a + b + c)^2 \geq 108Rr,$$

where  $s$  is the semiperimeter of the triangle  $ABC$ . Also, we will use the well-known relation

$$m_a^2 + m_b^2 + m_c^2 = \frac{3}{4}(a^2 + b^2 + c^2).$$

By Titu's lemma (a special case of the Cauchy-Schwarz inequality),

$$\begin{aligned} \frac{a^2}{m_b^2 + m_c^2} + \frac{b^2}{m_c^2 + m_a^2} + \frac{c^2}{m_a^2 + m_b^2} &\geq \frac{(a + b + c)^2}{2(m_a^2 + m_b^2 + m_c^2)} \\ &= \frac{2(a + b + c)^2}{3(a^2 + b^2 + c^2)} \\ &\geq \frac{108Rr}{27R^2} = \frac{4r}{R}. \end{aligned}$$

**4488.** Proposed by George Apostolopoulos.

Let  $ABC$  be an acute-angled triangle. Prove that

$$\sqrt{\cot A} + \sqrt{\cot B} + \sqrt{\cot C} \leq \sqrt{\cot \frac{A}{2} \cdot \cot \frac{B}{2} \cdot \cot \frac{C}{2}}.$$

We received 14 submissions, all correct, and we present the solution by Leonard Giugiuc.

We set  $x = \tan \frac{A}{2}$ ,  $y = \tan \frac{B}{2}$ , and  $z = \tan \frac{C}{2}$ . Then  $0 < x, y, z < 1$  and it is well known that  $xy + yz + zx = 1$ .

Since

$$\frac{1 - x^2}{2x} = \frac{1 - \tan^2 A/2}{2 \tan A/2} = \frac{1}{\tan A} = \cot A, \quad \frac{1 - y^2}{2y} = \cot B, \quad \text{and} \quad \frac{1 - z^2}{2z} = \cot C,$$

the given inequality is equivalent to

$$\sum_{cyc} \sqrt{\frac{1-x^2}{2x}} \leq \frac{1}{\sqrt{xyz}} \quad \text{or} \quad \sum_{cyc} \sqrt{\frac{yz(1-x^2)}{2}} \leq 1. \quad (1)$$

By the AM-GM inequality, we have

$$\sqrt{\frac{yz(1-x^2)}{2}} \leq \frac{1}{2} \left( yz + \frac{1-x^2}{2} \right) = \frac{1}{4} (2yz + 1 - x^2).$$

Similarly,

$$\sqrt{\frac{zx(1-y^2)}{2}} \leq \frac{1}{4} (2zx + 1 - y^2),$$

and

$$\sqrt{\frac{xy(1-z^2)}{2}} \leq \frac{1}{4} (2xy + 1 - z^2).$$

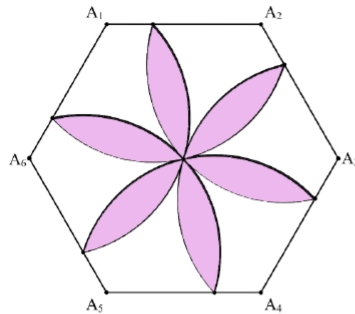
Adding up the three inequalities above then yields

$$\begin{aligned} \sum_{cyc} \sqrt{\frac{yz(1-x^2)}{2}} &\leq \frac{1}{4} (2(xy + yz + zx) + 3 - (x^2 + y^2 + z^2)) \\ &= \frac{1}{4} (5 - (x^2 + y^2 + z^2)) \\ &\leq \frac{1}{4} (5 - (xy + yz + zx)) = 1, \end{aligned}$$

so (1) holds and the proof is complete.

**4489.** *Proposed by Arsalan Wares.*

Regular hexagon  $A$  has its vertices at points  $A_1, A_2, A_3, A_4, A_5$  and  $A_6$ . Six circular congruent arcs are drawn inside hexagon  $A$  and all six pass through the center of  $A$ . The terminal points of each of the six arcs divide the sides of  $A$  in the ratio 3 : 7. The six regions within  $A$  that are bounded only by circular arcs have been shaded. Find the ratio of the area of  $A$  to the area of the shaded region.



We received 17 correct solutions. We present the solution by Jason Smith.

Let the side length of the hexagon be 10. The area of the entire hexagon is

$$A_{\text{hex}} = 6 \cdot \frac{1}{2} \cdot 10^2 \sin \frac{\pi}{3} = 150\sqrt{3}.$$

Let  $C$  denote the center of the hexagon and  $B_1, B_2, \dots, B_6$  the tips of the flower petals. For the squared distance  $r^2$  between consecutive tips, the law of cosines applied to triangle  $B_1A_2B_2$  gives

$$r^2 = 3^2 + 7^2 - 2 \cdot 3 \cdot 7 \cdot \cos \frac{2\pi}{3} = 79.$$

We can use this value of  $r^2$  to find the area of the of the two circular segments with vertices  $B_1$  and  $C$ . Since the area of one of these circular segments is the area of a sector of the circle minus the area of a triangle, we have

$$A_{\text{seg}} = \frac{1}{2}r^2\theta - \frac{1}{2}r^2 \sin \theta = \frac{1}{2} \cdot 79 \left( \frac{\pi}{3} - \sin \frac{\pi}{3} \right) = \frac{79}{2} \left( \frac{\pi}{3} - \frac{\sqrt{3}}{2} \right).$$

There are twelve such identical circular segments comprising the shaded region, so

$$A_{\text{sh}} = 12 \cdot \frac{79}{2} \left( \frac{\pi}{3} - \frac{\sqrt{3}}{2} \right) = 79(2\pi - 3\sqrt{3}).$$

Therefore, the ratio we seek is equal to

$$\frac{A_{\text{hex}}}{A_{\text{sh}}} = \frac{150\sqrt{3}}{79(2\pi - 3\sqrt{3})} \approx 3.025.$$

**4490.** Proposed by Borislav Mirchev and Leonard Giugiuc.

A line  $\ell$  through the orthocenter  $H$  of the acute triangle  $ABC$  meets the circumcircle at points  $K$  on the smaller arc  $AC$  and  $L$  on the smaller arc  $BC$ . If  $M, N$ , and  $P$  are the feet of the perpendiculars to  $\ell$  from the vertices  $A, B$ , and  $C$ , respectively, prove that  $PH = |KM - LN|$ .

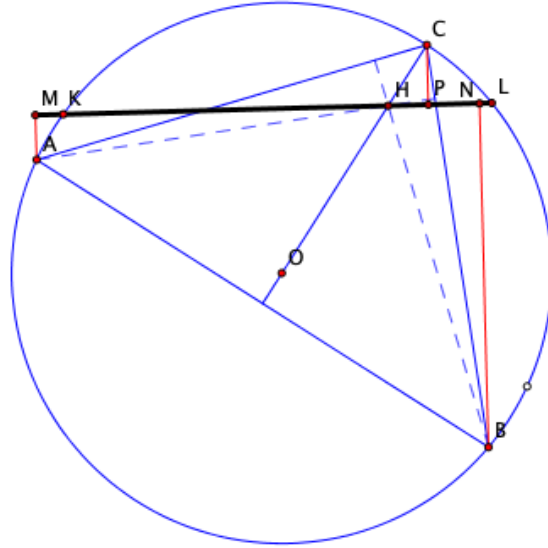
All 7 of the solutions we received were complete and correct, although four of them failed to express clearly the result that they were proving. We feature a composite of the independent solutions by Michel Bataille and by J. Chris Fisher.

As stated, the problem is not correct: see the accompanying figure where  $PH = KM + LN$ . Moreover, the statement is unnecessarily restrictive. We shall show the following result, which remains true independent of the figure:

A line  $\ell$  through the orthocenter  $H$  of an arbitrary triangle  $ABC$  meets the circumcircle at points  $K$  and  $L$ . If  $M, N$ , and  $P$  are the feet of the perpendiculars to  $\ell$  from the vertices  $A, B$ , and  $C$ , respectively, then

$$PH = \|\overrightarrow{KM} + \overrightarrow{LN}\|.$$

Therefore, we have that  $PH = KM + LN$  if  $\overrightarrow{KM}$  and  $\overrightarrow{LN}$  have the same sense, and  $PH = |KM - LN|$  otherwise.



For the proof, we can assume a unit circumradius, place the circumcenter at the origin, and rotate the figure about  $O$  so that  $\ell$  is parallel to the  $x$ -axis. If the coordinates of vertices are

$$A(a, a'), B(b, b'), \quad \text{and} \quad C(c, c'),$$

where  $a^2 + a'^2 = b^2 + b'^2 = c^2 + c'^2 = 1$ , then the orthocenter has coordinates

$$H(a + b + c, a' + b' + c').$$

By assumption,  $\ell$  is the line  $y = a' + b' + c'$ . The  $x$ -coordinates of  $M, N$ , and  $P$  will therefore be  $a, b$ , and  $c$ , respectively, while the  $x$ -coordinates of  $K$  and  $L$  have values  $k$  and  $-k$ , which we have no need to calculate. Thus,

$$PH = |(a + b + c) - c| = |a + b|.$$

When  $M$  and  $L$  are both inside or both outside the circumcircle, the vectors  $\overrightarrow{KM}$  and  $\overrightarrow{LN}$  point in opposite directions, whence the quantities  $k - a$  and  $-k - b$  have opposite signs. It follows that

$$|KM - LN| = |k - a + (-k - b)| = |a + b| = PH.$$

When one of  $M$  or  $N$  is inside the circumcircle and the other outside, then  $k - a$  and  $-k - b$  have the same sign, and

$$KM + LN = |k - a + (-k - b)| = |a + b| = PH,$$

as claimed.

*Editor's comments.* When the editors revised the statement of the proposers' problem, their assumption that both  $M$  and  $N$  lie inside the circumcircle was unfortunately omitted. There seems to be no obvious criteria for predicting the relative behaviour of  $M$  and  $N$ . It is easy to check that the assumption of acute angles is not sufficient. Consider, for example, an isosceles triangle  $ABC$  with  $CA = CB$ . When  $\angle C = 60^\circ$  (and  $H = O$ ) then for all choices of the point  $K$ ,  $\ell$  is a diameter, and both  $M$  and  $N$  are on or inside the circumcircle. But should  $\angle C > 60^\circ$  (and  $H$  be between  $C$  and  $O$  as in the above figure) then  $K$  can be chosen sufficiently close to  $A$  on the arc  $AC$  that omits  $B$  so that  $M$  is outside the circumcircle while  $N$  is inside. (This serves as a counterexample to the problem as revised by the editors.) Note that the value of the  $y$ -coordinate plays no role in the argument so that an analogous result holds for lines parallel to  $\ell$ . Note, finally, that when  $\angle C = 90^\circ$ , we have a rather nice, easily proved result, namely  $KM = CN$  (which is a consequence of our result for right triangles since  $PH = 0$  and  $C = L$ ).

